


# Leer la Hora en Relojes Analógicos (I)

Nombre: \_\_\_\_\_

Fecha: \_\_\_\_\_

Lea cada hora y escríbala en el espacio debajo del reloj.

1.




Medianoche



Mediodía

\_\_\_\_\_

2.




Medianoche



Mediodía

\_\_\_\_\_

3.




Mediodía



Medianoche

\_\_\_\_\_

4.




Medianoche



Mediodía

\_\_\_\_\_

5.




Medianoche



Mediodía

\_\_\_\_\_

6.




Mediodía



Medianoche

\_\_\_\_\_

7.



Mediodía




Medianoche



\_\_\_\_\_

8.



Mediodía




Medianoche



\_\_\_\_\_

9.



Medianoche




Mediodía



\_\_\_\_\_

10.



Mediodía




Medianoche



\_\_\_\_\_

11.



Medianoche




Mediodía



\_\_\_\_\_

12.



Mediodía



Medianoche



\_\_\_\_\_

# Leer la Hora en Relojes Analógicos (I) Respuestas

Nombre: \_\_\_\_\_

Fecha: \_\_\_\_\_

Lea cada hora y escríbala en el espacio debajo del reloj.

