

Contar Autos en Intervalos de 7 (A)

Rellene los espacios.



7









35



















98



105


































203



210

Contar Autos en Intervalos de a 7 (A) Respuestas

Rellene los espacios.



7



14



21



28



35



42



49



56



63



70



77



84



91



98



105



112



119



126




133



140




147



154




161



168



175




182



189



196



203



210

Imagen tomada de OpenClipArt.com

MatesLibres.com

Contar Autos en Intervalos de 7 (8)

Rellene los espacios.



7











49



56







77



84









112






126






















196





210

Contar Autos en Intervalos de a 7 (E) Respuestas

Rellene los espacios.



7



14



21



28



35



42



49



56



63



70



77



84



91



98



105



112



119



126



133




140




147




154



161




168



175




182




189



196



203



210

Contar Autos en Intervalos de a 7 (P)

Rellene los espacios.



7



14























91







112





























Contar Autos en Intervalos de a 7 (6) Respuestas

Rellene los espacios.



7



14



21



28



35



42



49



56



63



70



77



84



91



98



105



112



119



126



133




140



147



154



161




168




175



182



189



196



203



210

Contar Autos en Intervalos de a 7 (7)

Rellene los espacios.



7



14









42







63













105













140




147












182









Contar Autos en Intervalos de a 7 (7) Respuestas

Rellene los espacios.



7



14



21



28



35



42



49



56



63



70



77



84



91



98



105



112



119




126



133




140



147



154



161




168




175




182




189



196



203



210

Contar Autos en Intervalos de a 7 (E)

Rellene los espacios.



7





























112





133







161





182







Contar Autos en Intervalos de a 7 (E) Respuestas

Rellene los espacios.



7



14



21



28



35



42



49



56



63



70



77



84



91



98



105



112



119



126




133



140




147



154




161



168



175




182



189



196



203



210

Contar Autos en Intervalos de 7 (F)

Rellene los espacios.



7





21





35











70








































196



203



Contar Autos en Intervalos de a 7 (F) Respuestas

Rellene los espacios.



7



14



21



28



35



42



49



56



63



70



77



84



91



98



105



112



119



126



133




140




147




154



161




168



175




182




189



196



203



210

Imagen tomada de OpenClipArt.com

Contar Autos en Intervalos de 7 (G)

Rellene los espacios.



7





28






















































210

Contar Autos en Intervalos de a 7 (G) Respuestas

Rellene los espacios.



7



14



21



28



35



42



49



56



63



70



77



84



91



98



105



112



119



126



133




140



147




154



161




168




175




182




189



196



203



210

Contar Autos en Intervalos de 7 (H)

Rellene los espacios.



7



14





















84





98



105







126





















196






Contar Autos en Intervalos de a 7 (H) Respuestas

Rellene los espacios.



7



14



21



28



35



42



49



56



63



70



77



84



91



98



105



112



119



126



133



140



147



154



161



168



175



182



189



196



203



210

Imagen tomada de OpenClipArt.com

Contar Autos en Intervalos de 7 (7)

Rellene los espacios.



7



























105



112

























203

Contar Autos en Intervalos de 7 (7) Respuestas

Rellene los espacios.



7



14



21



28



35



42



49



56



63



70



77



84



91



98



105



112



119



126




133



140




147



154




161



168



175




182



189



196



203



210

Imagen tomada de OpenClipArt.com

Contar Autos en Intervalos de a 7 (I)

Rellene los espacios.



7















63









98






119







140



147











196





210

Contar Autos en Intervalos de 7 (I) Respuestas

Rellene los espacios.



7



14



21



28



35



42



49



56



63



70



77



84



91



98



105



112



119



126



133




140




147




154



161




168



175




182




189



196



203



210

Imagen tomada de OpenClipArt.com

MatesLibres.com