

# Contar Autos en Intervalos de a 7 (I)

Rellene los espacios.



7

\_\_\_\_\_



\_\_\_\_\_



\_\_\_\_\_



\_\_\_\_\_



\_\_\_\_\_



\_\_\_\_\_



\_\_\_\_\_



63

\_\_\_\_\_



\_\_\_\_\_



\_\_\_\_\_



\_\_\_\_\_



98

\_\_\_\_\_



\_\_\_\_\_



119



\_\_\_\_\_



\_\_\_\_\_



140



147

\_\_\_\_\_



\_\_\_\_\_



\_\_\_\_\_



\_\_\_\_\_



\_\_\_\_\_



196



\_\_\_\_\_



210

# Contar Autos en Intervalos de 7 (I) Respuestas

Rellene los espacios.



7



14



21



28



35



42



49



56



63



70



77



84



91



98



105



112



119



126




133



140



147




154




161



168



175



182



189



196



203



210

Imagen tomada de OpenClipArt.com