

Contar Autos en Intervalos de a 7 (7)

Rellene los espacios.



7



























105



112


























203



Contar Autos en Intervalos de 7 (7) Respuestas

Rellene los espacios.



7



14



21



28



35



42



49



56



63



70



77



84



91



98



105



112



119



126



133




140




147



154



161



168



175




182



189



196



203



210

Imagen tomada de OpenClipArt.com