

Contar Autos en Intervalos de a 7 (8)

Rellene los espacios.



7











49



56







77



84









112





126
























196





210

Contar Autos en Intervalos de a 7 (E) Respuestas

Rellene los espacios.



7



14



21



28



35



42



49



56



63



70



77



84



91



98



105



112



119



126



133



140



147



154



161



168



175



182



189



196



203



210