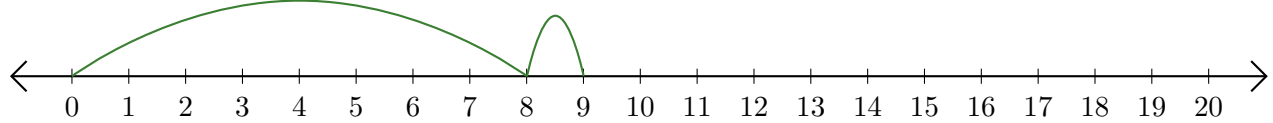


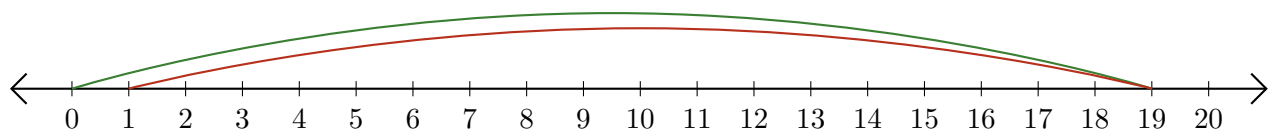
Leer Rectas Numéricas (H)

Escriba la pregunta que representa cada recta numérica.

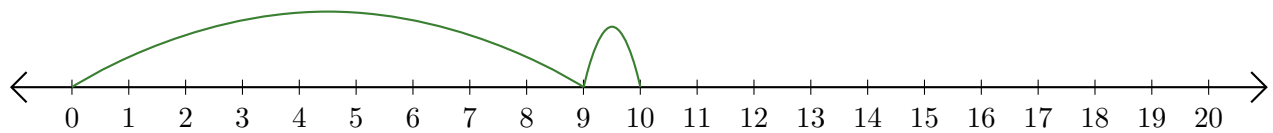
1. $\underline{\quad} + \underline{\quad} = \underline{\quad}$



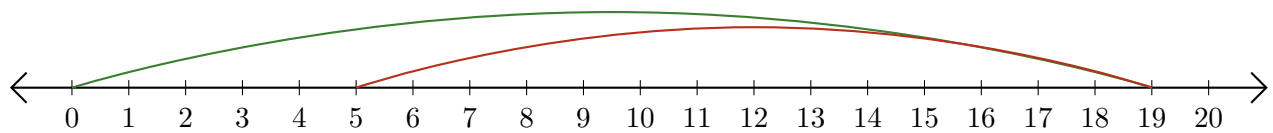
2. $\underline{\quad} - \underline{\quad} = \underline{\quad}$



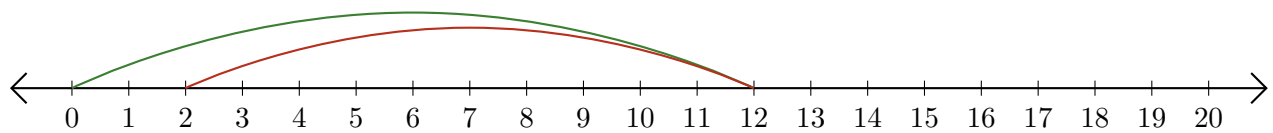
3. $\underline{\quad} + \underline{\quad} = \underline{\quad}$



4. $\underline{\quad} - \underline{\quad} = \underline{\quad}$



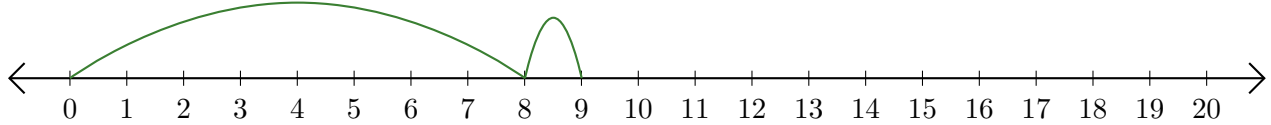
5. $\underline{\quad} - \underline{\quad} = \underline{\quad}$



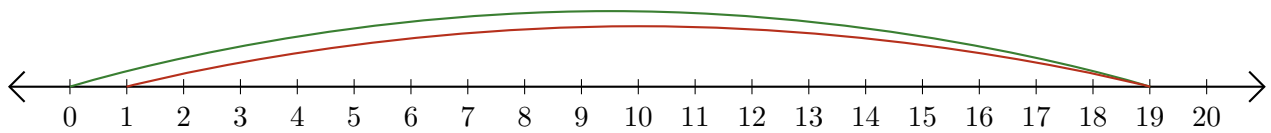
Leer Rectas Numéricas (H) Respuestas

Escriba la pregunta que representa cada recta numérica.

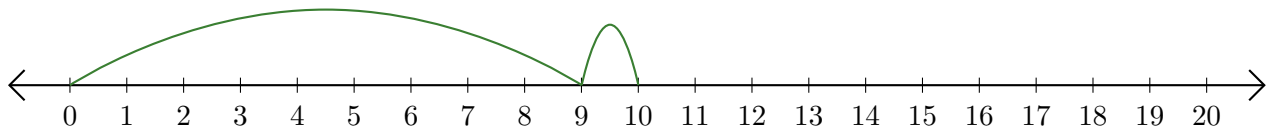
1. $\underline{8} + \underline{1} = \underline{9}$



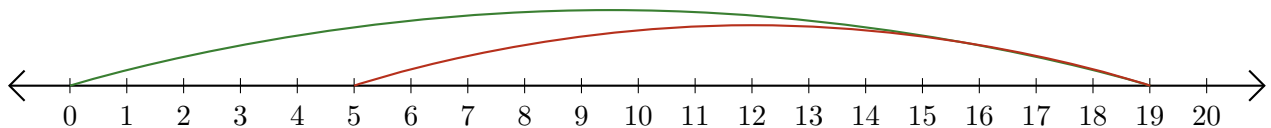
2. $\underline{19} - \underline{18} = \underline{1}$



3. $\underline{9} + \underline{1} = \underline{10}$



4. $\underline{19} - \underline{14} = \underline{5}$



5. $\underline{12} - \underline{10} = \underline{2}$

