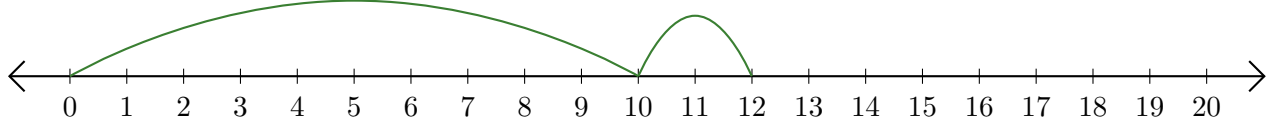


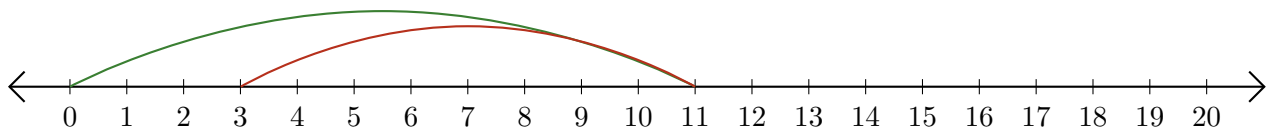
Leer Rectas Numéricas (F)

Escriba la pregunta que representa cada recta numérica.

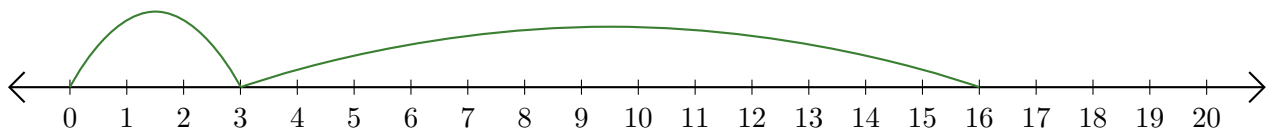
1. $\underline{\quad} + \underline{\quad} = \underline{\quad}$



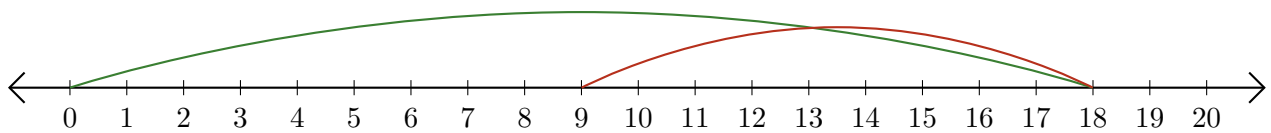
2. $\underline{\quad} - \underline{\quad} = \underline{\quad}$



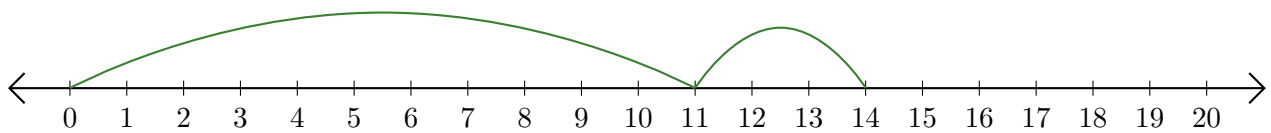
3. $\underline{\quad} + \underline{\quad} = \underline{\quad}$



4. $\underline{\quad} - \underline{\quad} = \underline{\quad}$



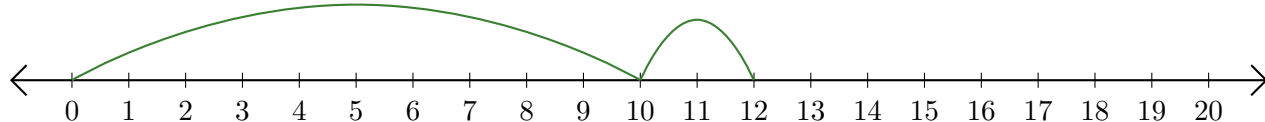
5. $\underline{\quad} + \underline{\quad} = \underline{\quad}$



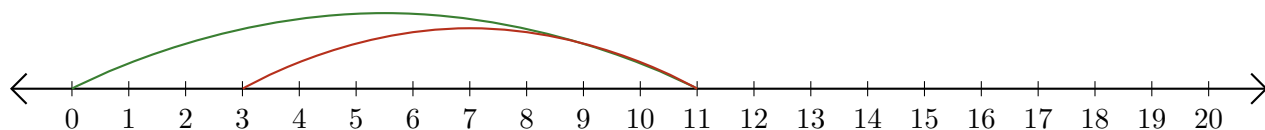
Leer Rectas Numéricas (F) Respuestas

Escriba la pregunta que representa cada recta numérica.

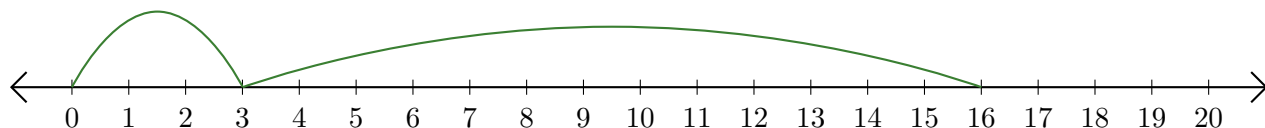
1. $\underline{10} + \underline{2} = \underline{12}$



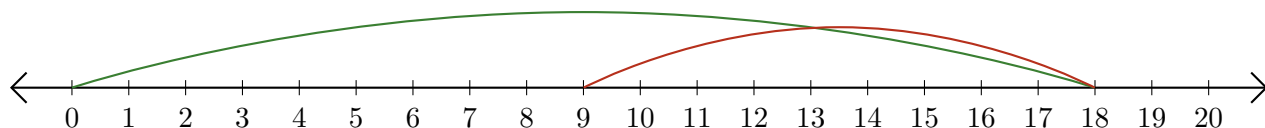
2. $\underline{11} - \underline{8} = \underline{3}$



3. $\underline{3} + \underline{13} = \underline{16}$



4. $\underline{18} - \underline{9} = \underline{9}$



5. $\underline{11} + \underline{3} = \underline{14}$

