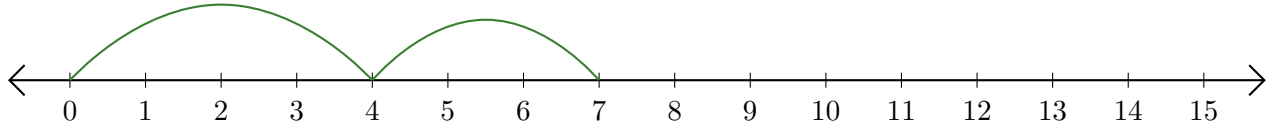


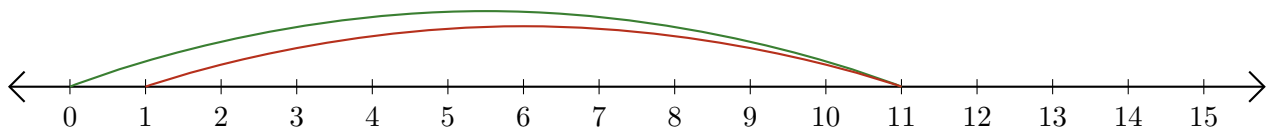
Leer Rectas Numéricas (J)

Escriba la pregunta que representa cada recta numérica.

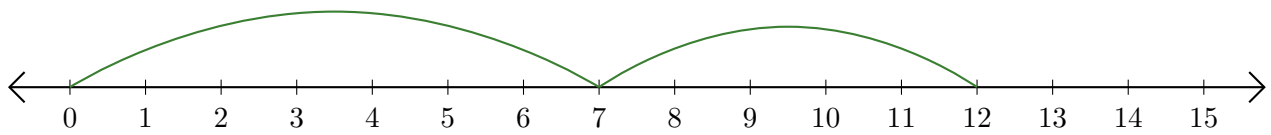
1. $\underline{\quad} + \underline{\quad} = \underline{\quad}$



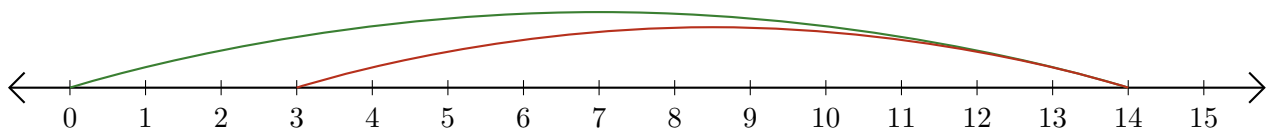
2. $\underline{\quad} - \underline{\quad} = \underline{\quad}$



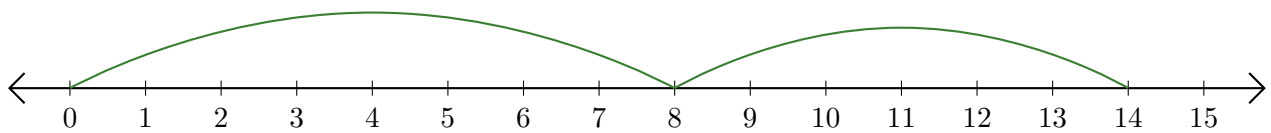
3. $\underline{\quad} + \underline{\quad} = \underline{\quad}$



4. $\underline{\quad} - \underline{\quad} = \underline{\quad}$



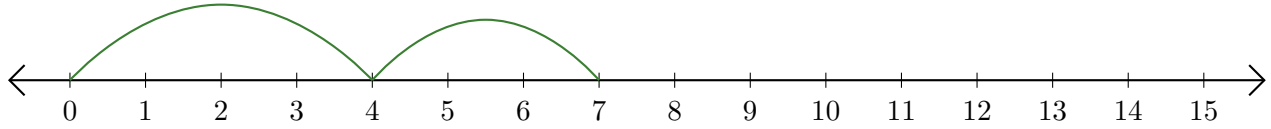
5. $\underline{\quad} + \underline{\quad} = \underline{\quad}$



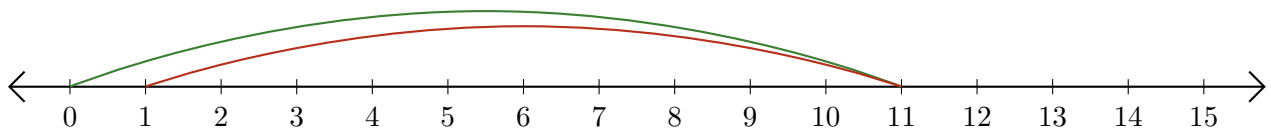
Leer Rectas Numéricas (J) Respuestas

Escriba la pregunta que representa cada recta numérica.

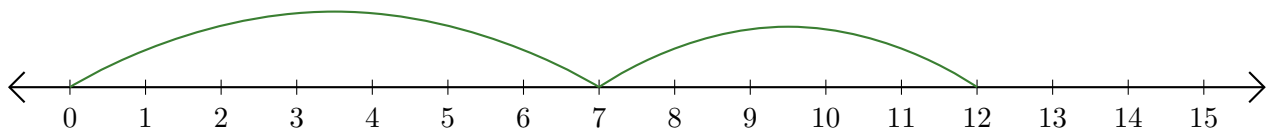
1. $\underline{4} + \underline{3} = \underline{7}$



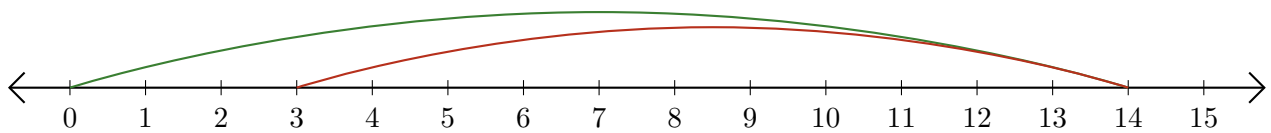
2. $\underline{11} - \underline{10} = \underline{1}$



3. $\underline{7} + \underline{5} = \underline{12}$



4. $\underline{14} - \underline{11} = \underline{3}$



5. $\underline{8} + \underline{6} = \underline{14}$

