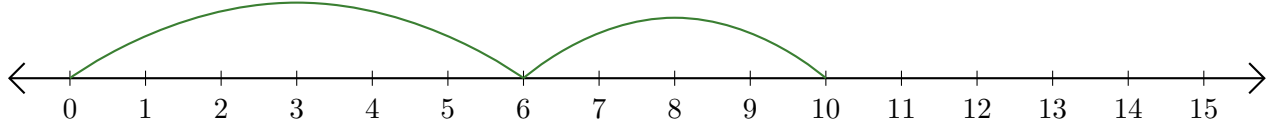


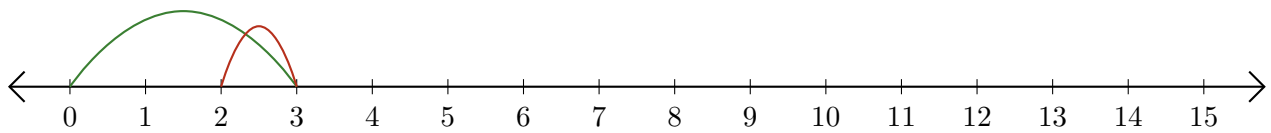
Leer Rectas Numéricas (A)

Escriba la pregunta que representa cada recta numérica.

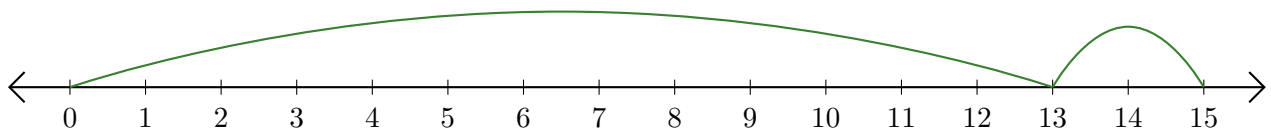
1. $\underline{\quad} + \underline{\quad} = \underline{\quad}$



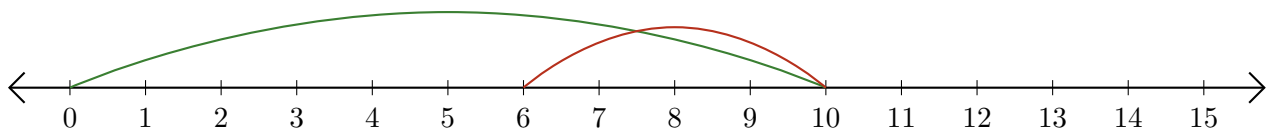
2. $\underline{\quad} - \underline{\quad} = \underline{\quad}$



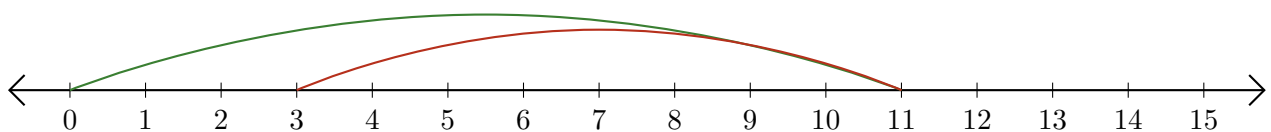
3. $\underline{\quad} + \underline{\quad} = \underline{\quad}$



4. $\underline{\quad} - \underline{\quad} = \underline{\quad}$



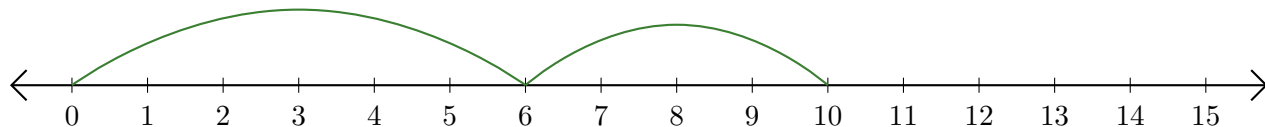
5. $\underline{\quad} - \underline{\quad} = \underline{\quad}$



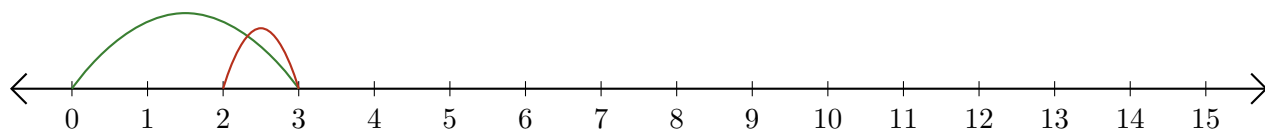
Leer Rectas Numéricas (A) Respuestas

Escriba la pregunta que representa cada recta numérica.

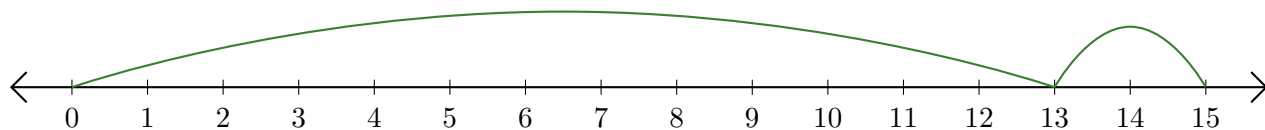
1. $\underline{6} + \underline{4} = \underline{10}$



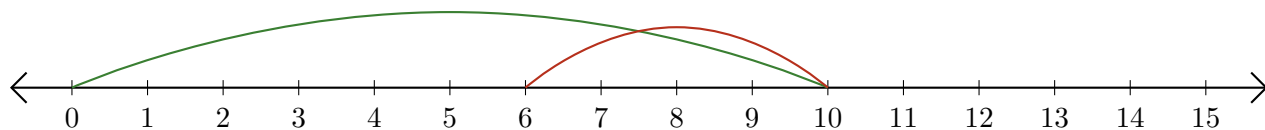
2. $\underline{3} - \underline{1} = \underline{2}$



3. $\underline{13} + \underline{2} = \underline{15}$



4. $\underline{10} - \underline{4} = \underline{6}$



5. $\underline{11} - \underline{8} = \underline{3}$

