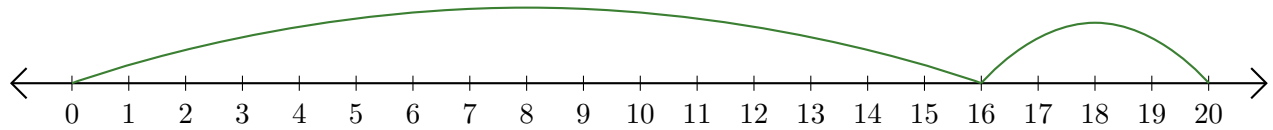


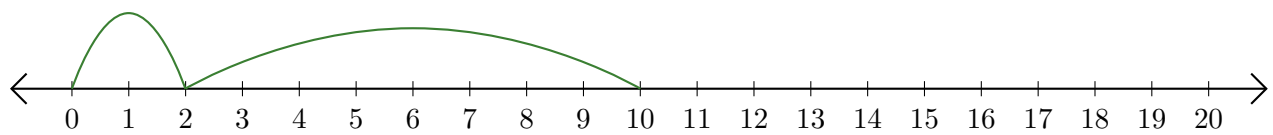
Leer Rectas Numéricas (A)

Escriba la pregunta que representa cada recta numérica.

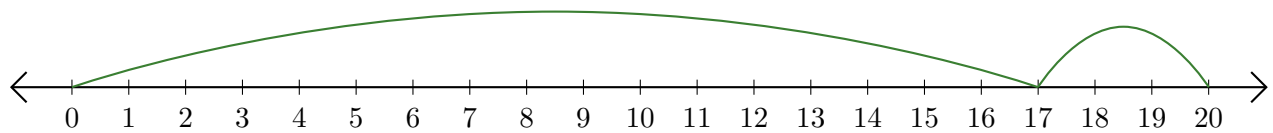
1. $\underline{\quad} + \underline{\quad} = \underline{\quad}$



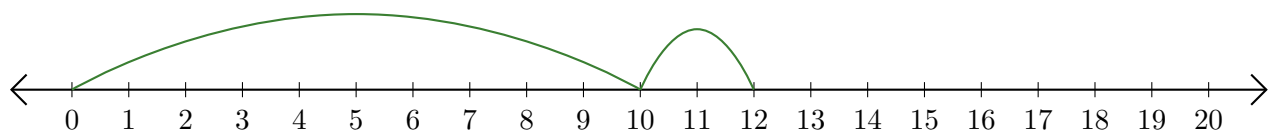
2. $\underline{\quad} + \underline{\quad} = \underline{\quad}$



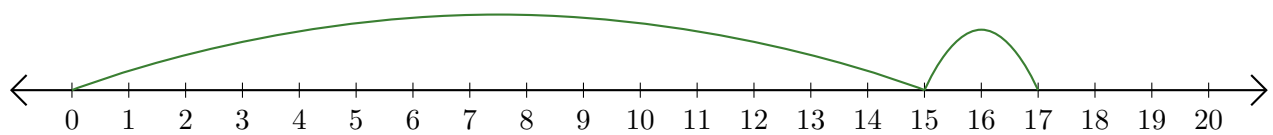
3. $\underline{\quad} + \underline{\quad} = \underline{\quad}$



4. $\underline{\quad} + \underline{\quad} = \underline{\quad}$



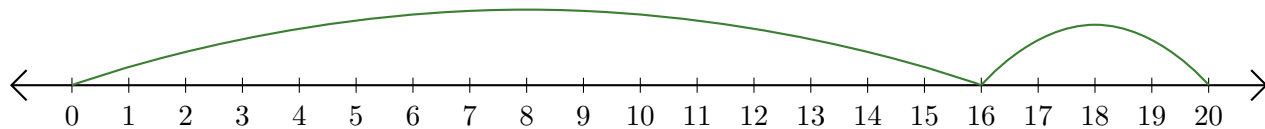
5. $\underline{\quad} + \underline{\quad} = \underline{\quad}$



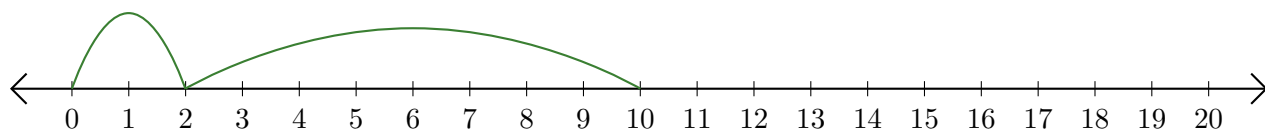
Leer Rectas Numéricas (A) Respuestas

Escriba la pregunta que representa cada recta numérica.

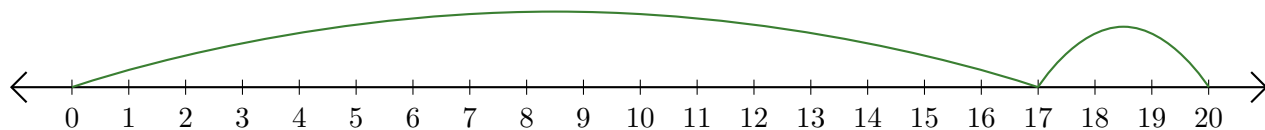
1. $\underline{16} + \underline{4} = \underline{20}$



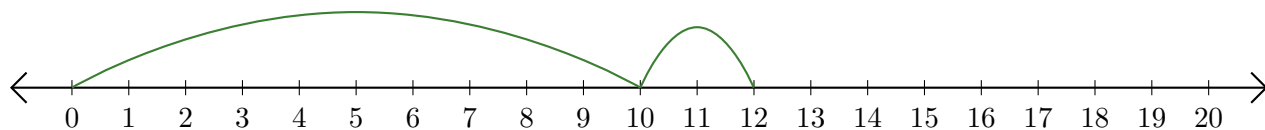
2. $\underline{2} + \underline{8} = \underline{10}$



3. $\underline{17} + \underline{3} = \underline{20}$



4. $\underline{10} + \underline{2} = \underline{12}$



5. $\underline{15} + \underline{2} = \underline{17}$

