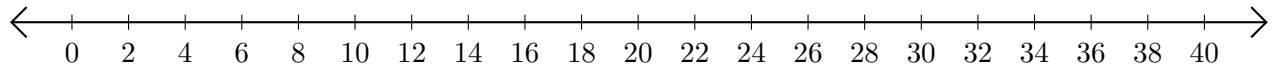


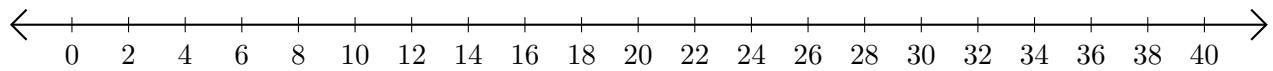
Sumar y Restar en Rectas Numéricas (A)

Use las rectas numéricas para calcular cada suma o diferencia.

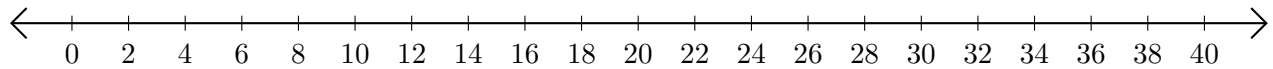
1. $10 + 24 = \underline{\quad}$



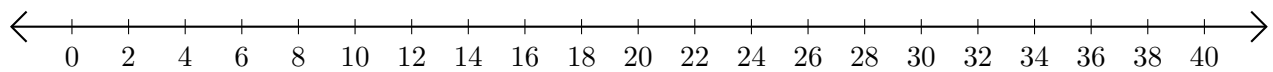
2. $38 - 36 = \underline{\quad}$



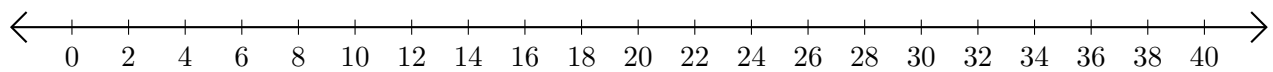
3. $30 + 10 = \underline{\quad}$



4. $38 - 34 = \underline{\quad}$



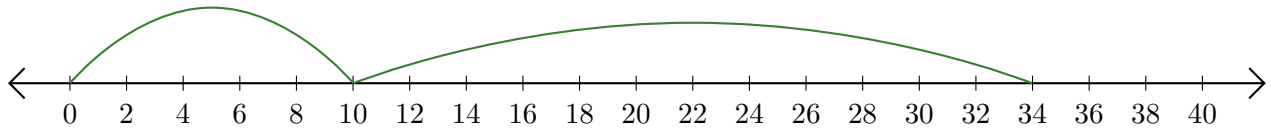
5. $28 + 8 = \underline{\quad}$



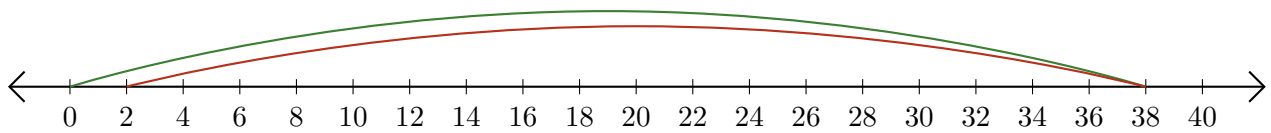
Sumar y Restar en Rectas Numéricas (A) Respuestas

Use las rectas numéricas para calcular cada suma o diferencia.

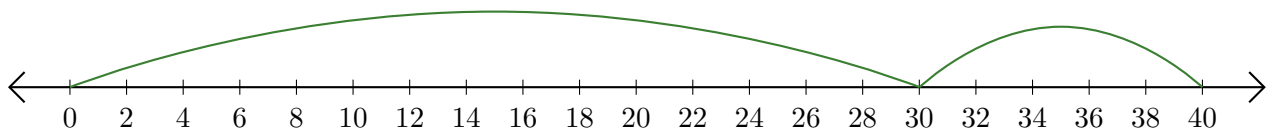
1. $10 + 24 = \underline{34}$



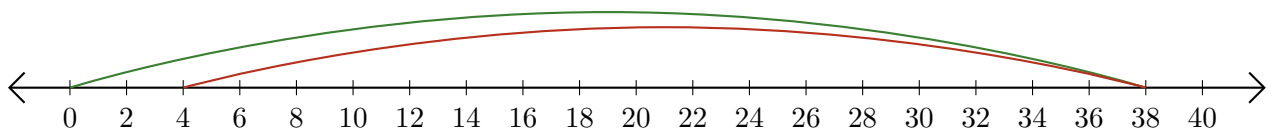
2. $38 - 36 = \underline{2}$



3. $30 + 10 = \underline{40}$



4. $38 - 34 = \underline{4}$



5. $28 + 8 = \underline{36}$

