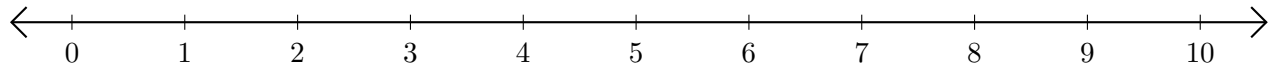


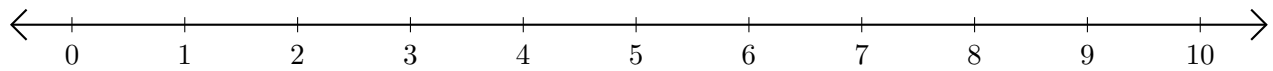
Sumar y Restar en Rectas Numéricas (G)

Use las rectas numéricas para calcular cada suma o diferencia.

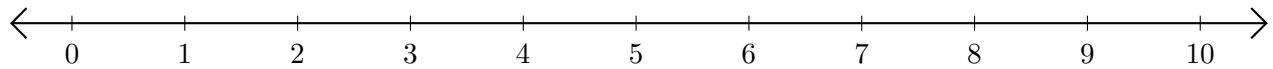
1. $7 + 2 = \underline{\quad}$



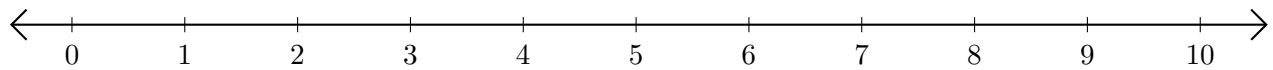
2. $6 - 5 = \underline{\quad}$



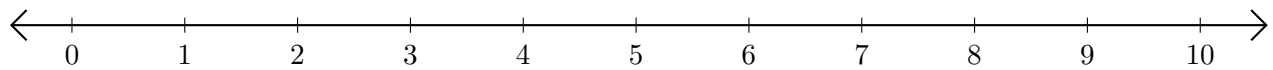
3. $3 + 4 = \underline{\quad}$



4. $5 - 4 = \underline{\quad}$



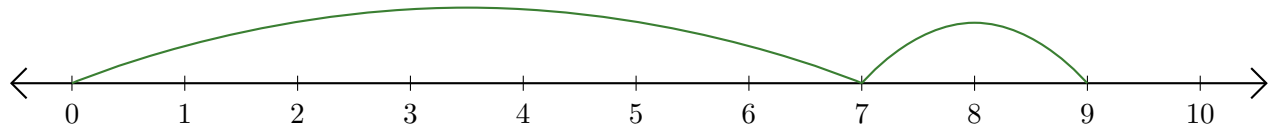
5. $10 - 8 = \underline{\quad}$



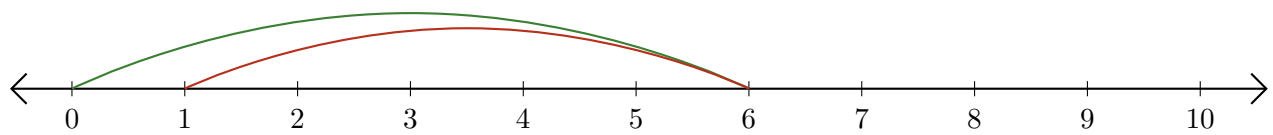
Sumar y Restar en Rectas Numéricas (G) Respuestas

Use las rectas numéricas para calcular cada suma o diferencia.

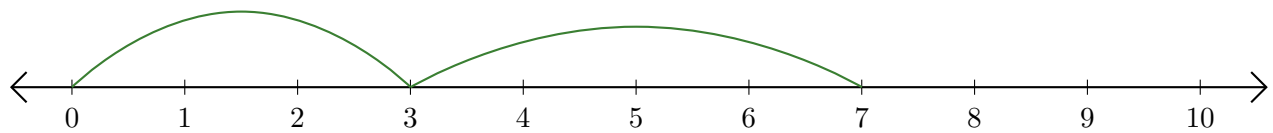
1. $7 + 2 = \underline{9}$



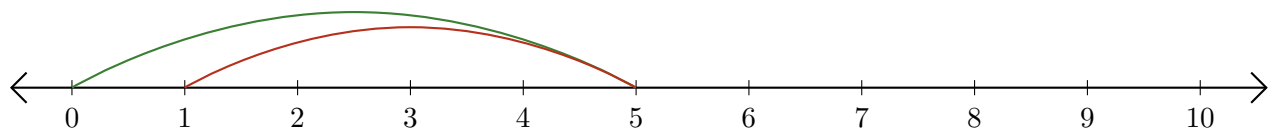
2. $6 - 5 = \underline{1}$



3. $3 + 4 = \underline{7}$



4. $5 - 4 = \underline{1}$



5. $10 - 8 = \underline{2}$

