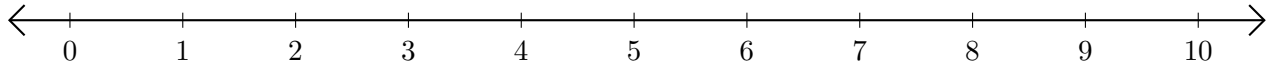


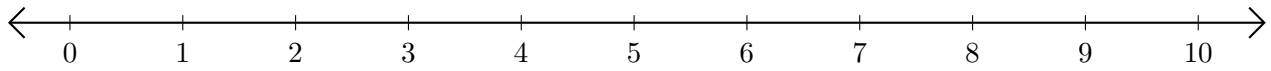
Sumar y Restar en Rectas Numéricas (F)

Use las rectas numéricas para calcular cada suma o diferencia.

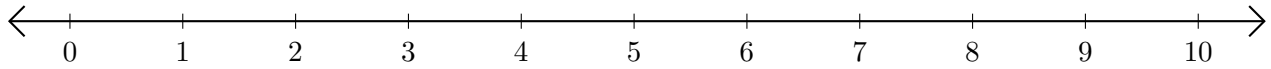
1. $2 + 2 = \underline{\quad}$



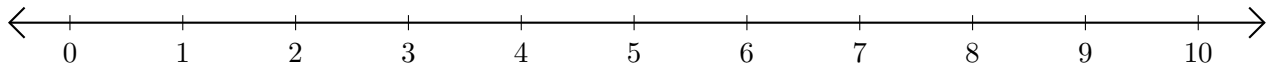
2. $9 - 8 = \underline{\quad}$



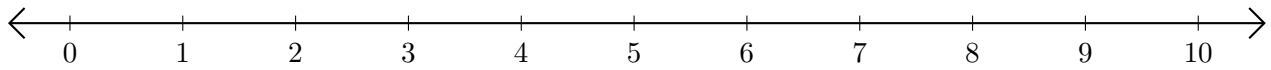
3. $9 + 1 = \underline{\quad}$



4. $6 - 4 = \underline{\quad}$



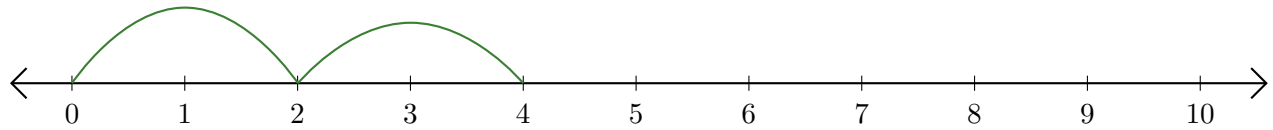
5. $3 + 6 = \underline{\quad}$



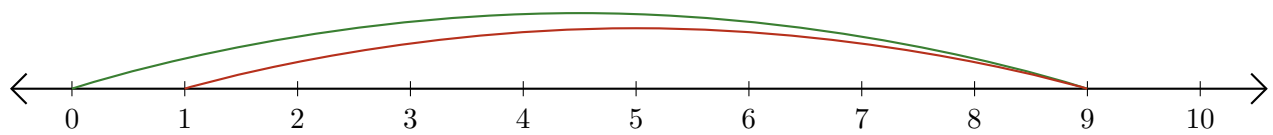
Sumar y Restar en Rectas Numéricas (F) Respuestas

Use las rectas numéricas para calcular cada suma o diferencia.

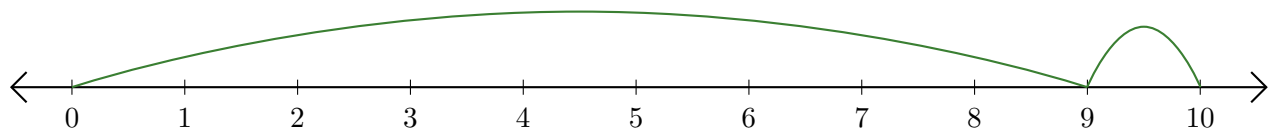
1. $2 + 2 = \underline{4}$



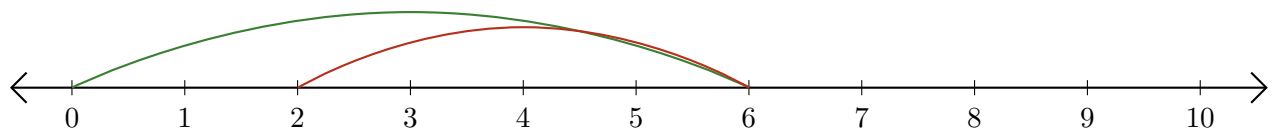
2. $9 - 8 = \underline{1}$



3. $9 + 1 = \underline{10}$



4. $6 - 4 = \underline{2}$



5. $3 + 6 = \underline{9}$

