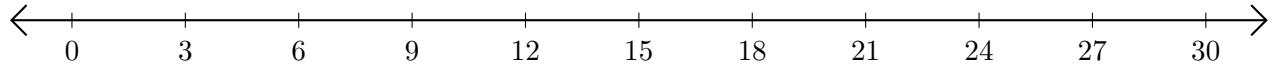


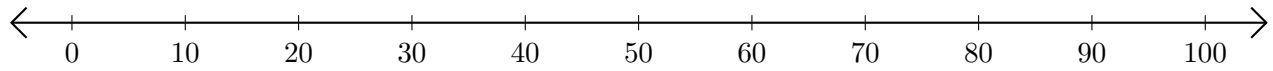
Sumar en Rectas Numéricas (I)

Use las rectas numéricas para calcular cada suma.

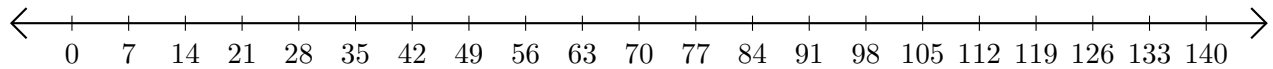
1. $6 + 9 = \underline{\quad}$



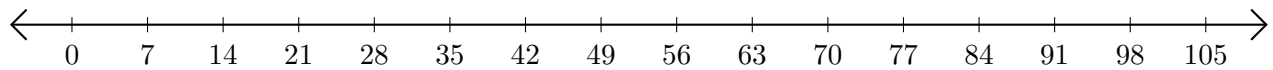
2. $80 + 10 = \underline{\quad}$



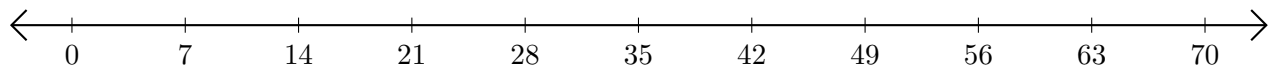
3. $126 + 14 = \underline{\quad}$



4. $56 + 21 = \underline{\quad}$



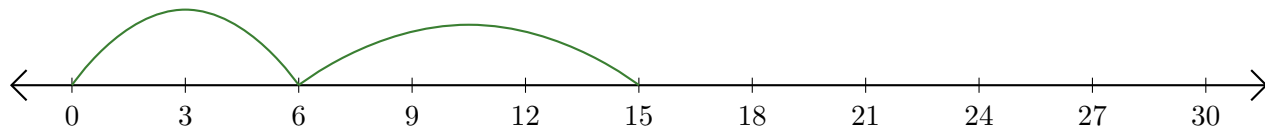
5. $35 + 35 = \underline{\quad}$



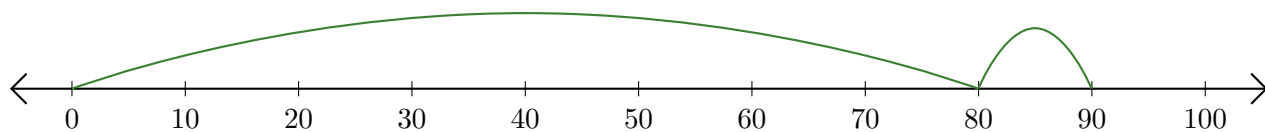
Sumar en Rectas Numéricas (I) Respuestas

Use las rectas numéricas para calcular cada suma.

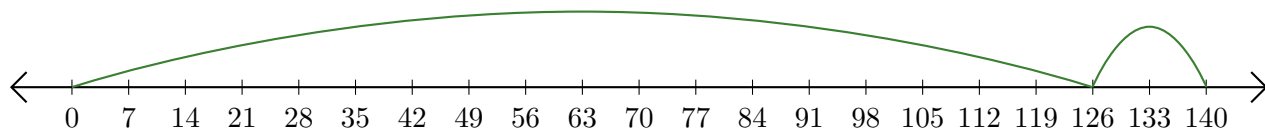
1. $6 + 9 = \underline{15}$



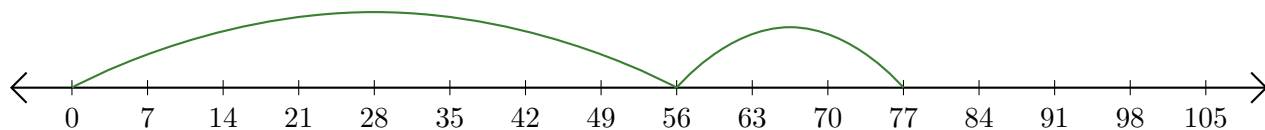
2. $80 + 10 = \underline{90}$



3. $126 + 14 = \underline{140}$



4. $56 + 21 = \underline{77}$



5. $35 + 35 = \underline{70}$

