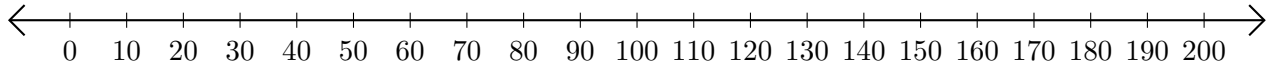


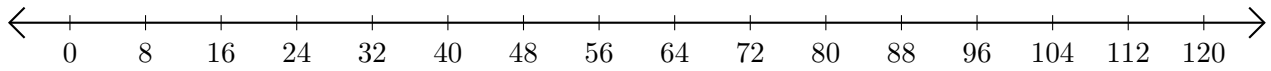
# Sumar en Rectas Numéricas (A)

Use las rectas numéricas para calcular cada suma.

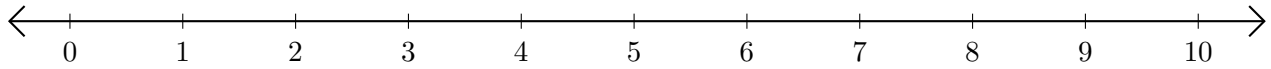
1.  $20 + 150 = \underline{\hspace{2cm}}$



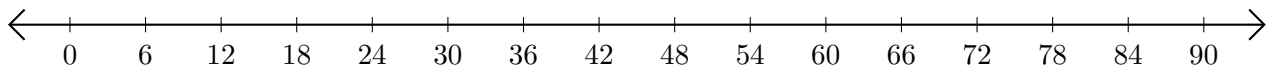
2.  $96 + 16 = \underline{\hspace{2cm}}$



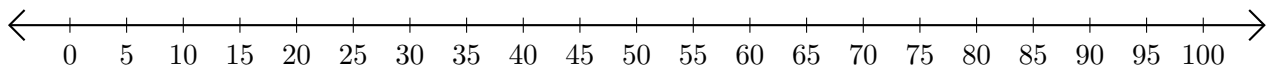
3.  $1 + 7 = \underline{\hspace{2cm}}$



4.  $6 + 12 = \underline{\hspace{2cm}}$



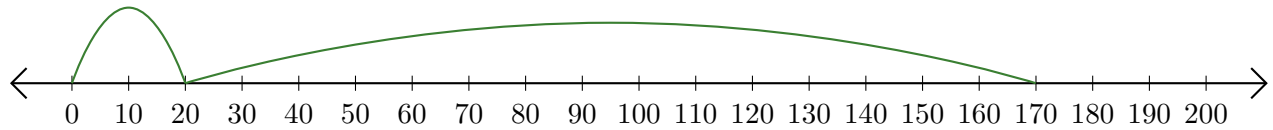
5.  $5 + 20 = \underline{\hspace{2cm}}$



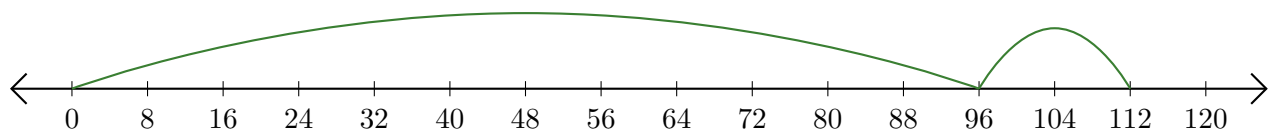
# Sumar en Rectas Numéricas (A) Respuestas

Use las rectas numéricas para calcular cada suma.

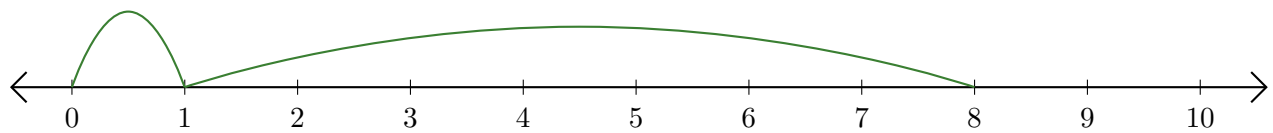
1.  $20 + 150 = \underline{170}$



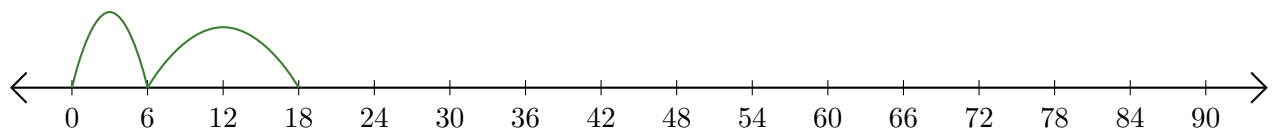
2.  $96 + 16 = \underline{112}$



3.  $1 + 7 = \underline{8}$



4.  $6 + 12 = \underline{18}$



5.  $5 + 20 = \underline{25}$

