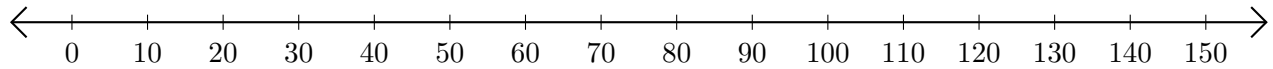


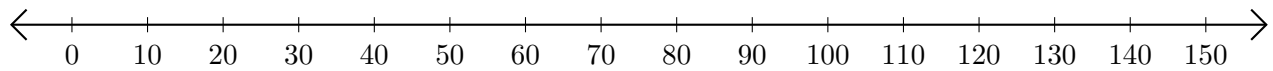
Sumar en Rectas Numéricas (J)

Use las rectas numéricas para calcular cada suma.

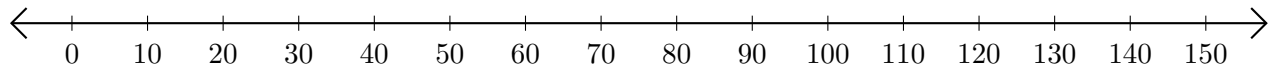
1. $20 + 110 = \underline{\hspace{2cm}}$



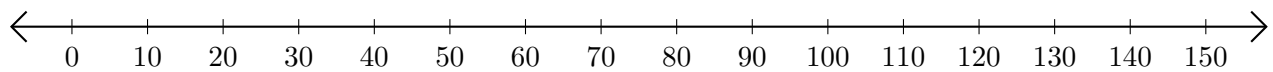
2. $120 + 20 = \underline{\hspace{2cm}}$



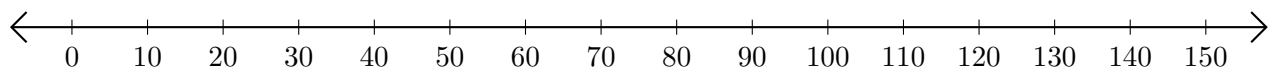
3. $50 + 40 = \underline{\hspace{2cm}}$



4. $80 + 10 = \underline{\hspace{2cm}}$



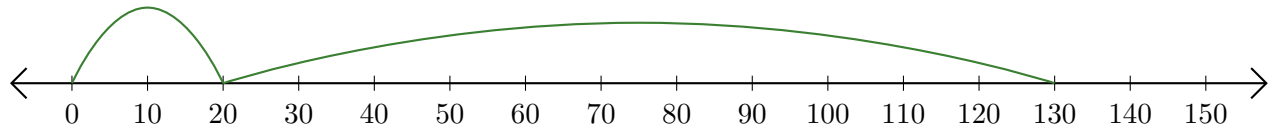
5. $10 + 20 = \underline{\hspace{2cm}}$



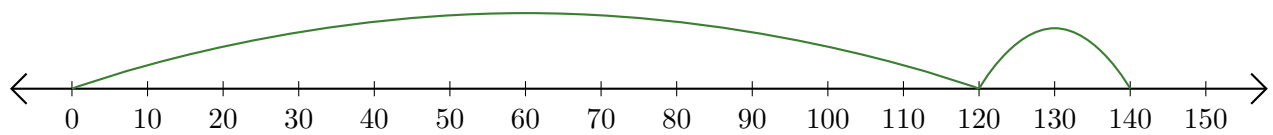
Sumar en Rectas Numéricas (J) Respuestas

Use las rectas numéricas para calcular cada suma.

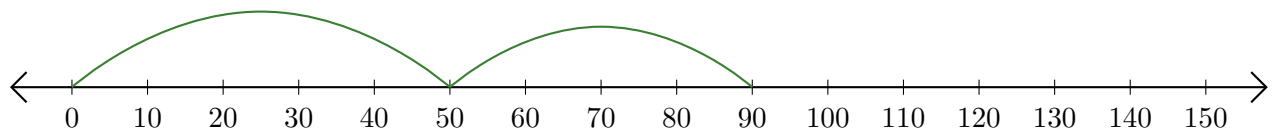
1. $20 + 110 = \underline{130}$



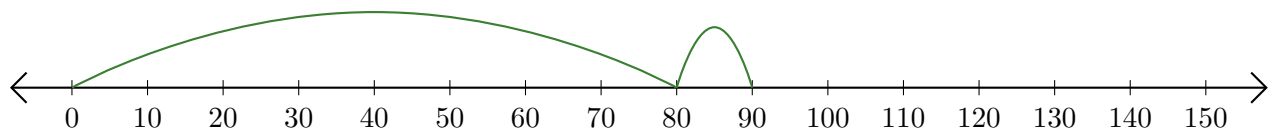
2. $120 + 20 = \underline{140}$



3. $50 + 40 = \underline{90}$



4. $80 + 10 = \underline{90}$



5. $10 + 20 = \underline{30}$

