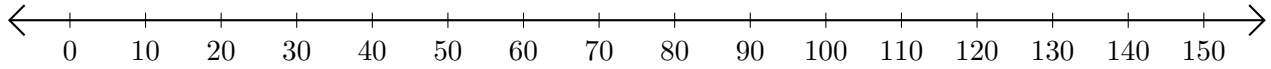


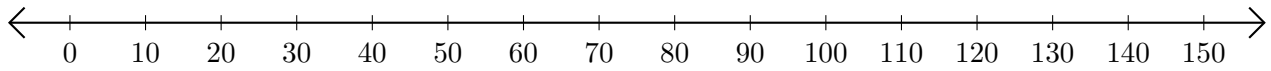
Sumar en Rectas Numéricas (H)

Use las rectas numéricas para calcular cada suma.

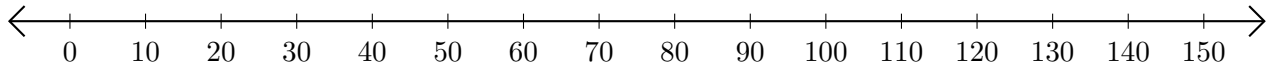
1. $20 + 130 = \underline{\hspace{2cm}}$



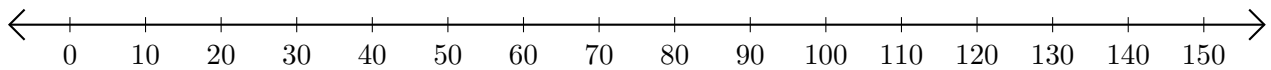
2. $30 + 90 = \underline{\hspace{2cm}}$



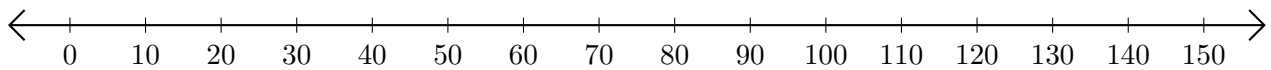
3. $50 + 40 = \underline{\hspace{2cm}}$



4. $10 + 120 = \underline{\hspace{2cm}}$



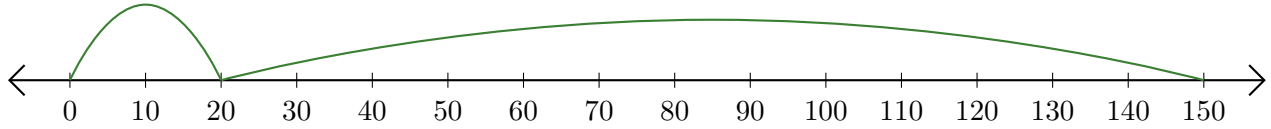
5. $140 + 10 = \underline{\hspace{2cm}}$



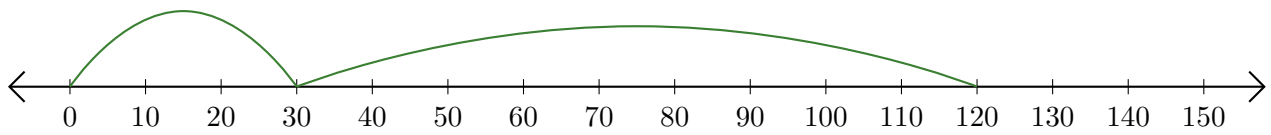
Sumar en Rectas Numéricas (H) Respuestas

Use las rectas numéricas para calcular cada suma.

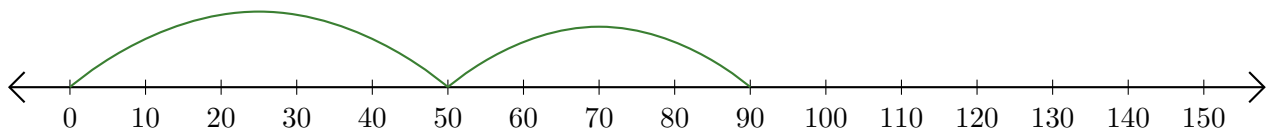
1. $20 + 130 = \underline{150}$



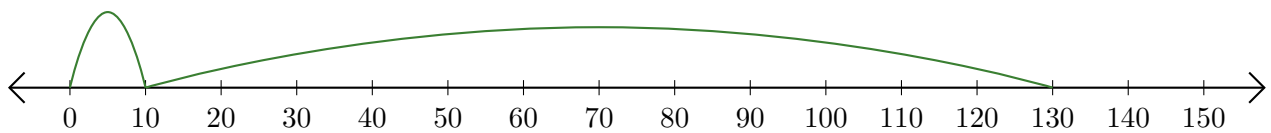
2. $30 + 90 = \underline{120}$



3. $50 + 40 = \underline{90}$



4. $10 + 120 = \underline{130}$



5. $140 + 10 = \underline{150}$

