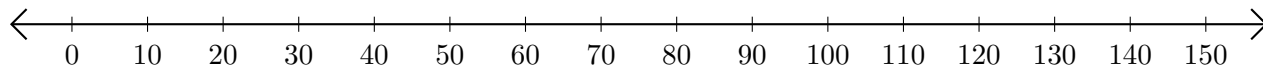


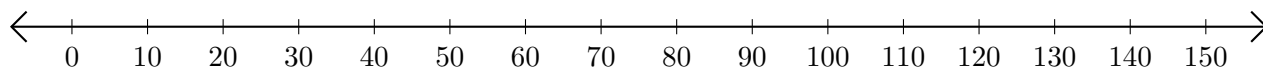
# Sumar en Rectas Numéricas (F)

Use las rectas numéricas para calcular cada suma.

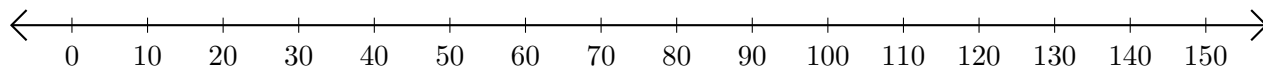
1.  $60 + 90 = \underline{\hspace{2cm}}$



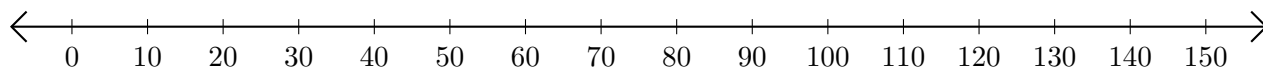
2.  $120 + 20 = \underline{\hspace{2cm}}$



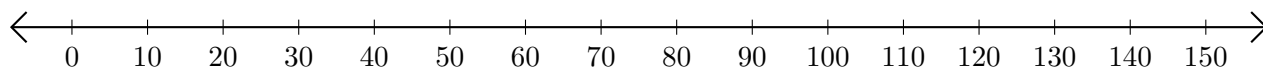
3.  $10 + 50 = \underline{\hspace{2cm}}$



4.  $140 + 10 = \underline{\hspace{2cm}}$



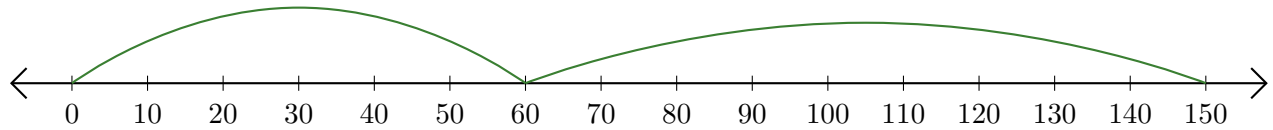
5.  $70 + 10 = \underline{\hspace{2cm}}$



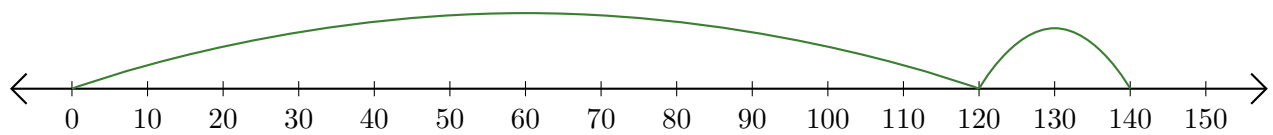
# Sumar en Rectas Numéricas (F) Respuestas

Use las rectas numéricas para calcular cada suma.

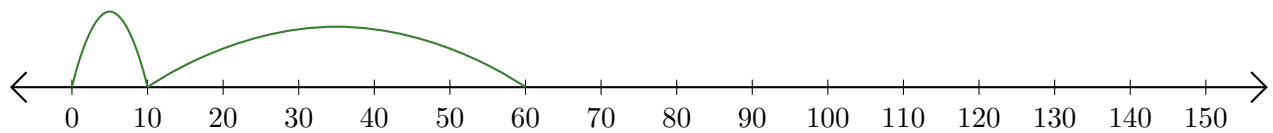
1.  $60 + 90 = \underline{150}$



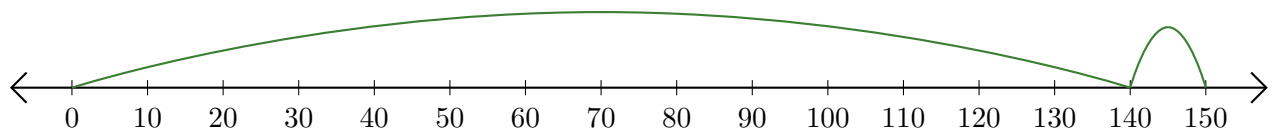
2.  $120 + 20 = \underline{140}$



3.  $10 + 50 = \underline{60}$



4.  $140 + 10 = \underline{150}$



5.  $70 + 10 = \underline{80}$

