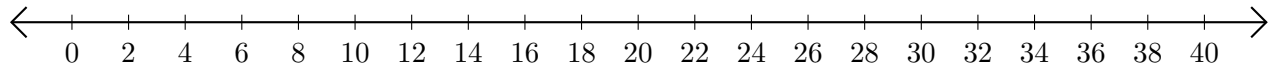


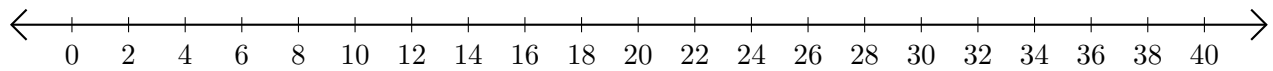
# Sumar en Rectas Numéricas (J)

Use las rectas numéricas para calcular cada suma.

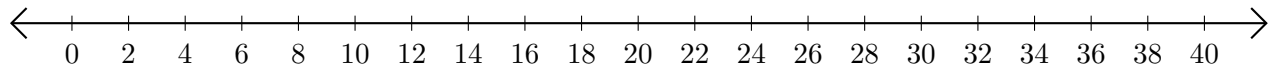
1.  $18 + 2 = \underline{\quad}$



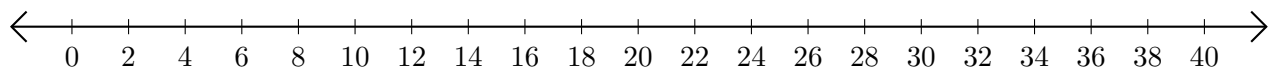
2.  $24 + 8 = \underline{\quad}$



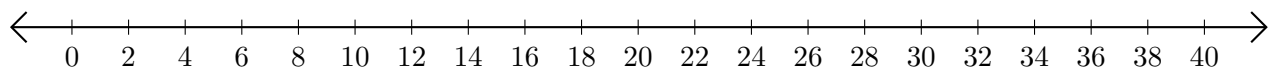
3.  $28 + 4 = \underline{\quad}$



4.  $26 + 2 = \underline{\quad}$



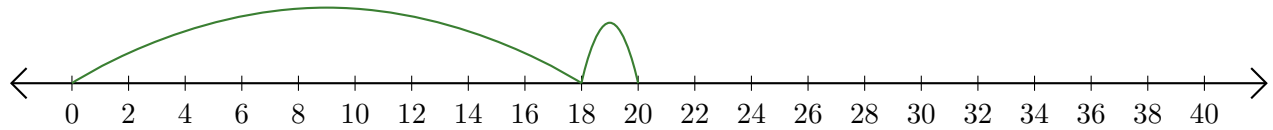
5.  $30 + 10 = \underline{\quad}$



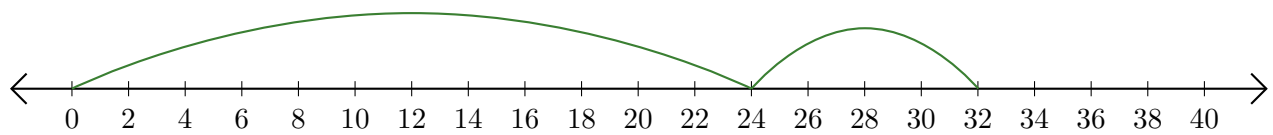
# Sumar en Rectas Numéricas (J) Respuestas

Use las rectas numéricas para calcular cada suma.

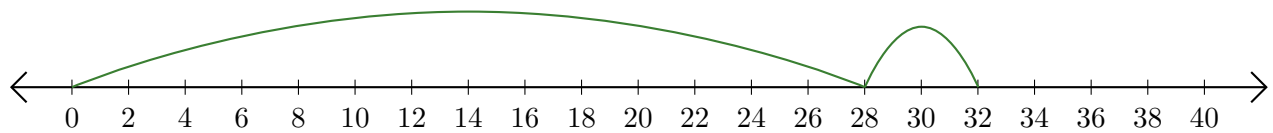
1.  $18 + 2 = \underline{20}$



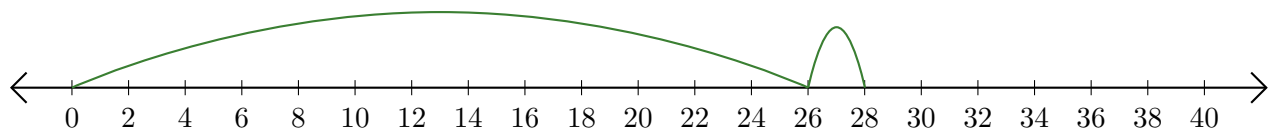
2.  $24 + 8 = \underline{32}$



3.  $28 + 4 = \underline{32}$



4.  $26 + 2 = \underline{28}$



5.  $30 + 10 = \underline{40}$

