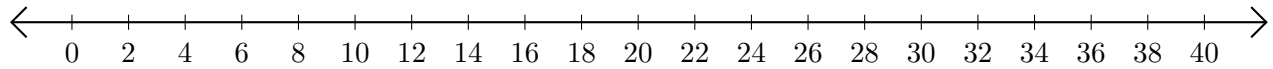


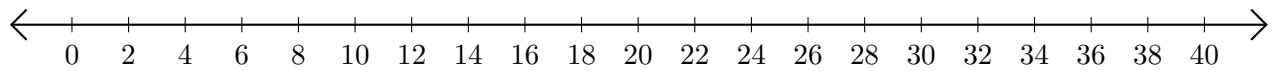
Sumar en Rectas Numéricas (A)

Use las rectas numéricas para calcular cada suma.

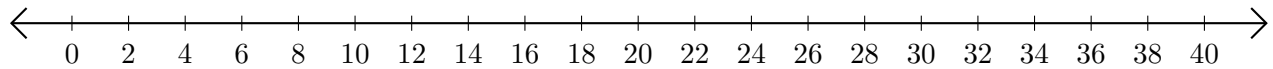
1. $30 + 2 = \underline{\quad}$



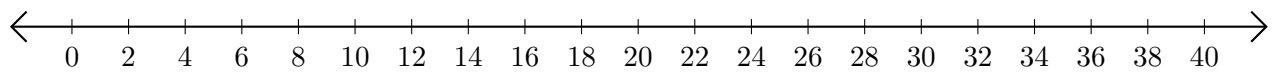
2. $4 + 28 = \underline{\quad}$



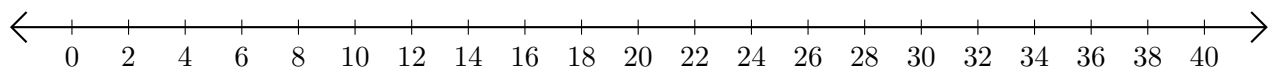
3. $34 + 2 = \underline{\quad}$



4. $8 + 4 = \underline{\quad}$



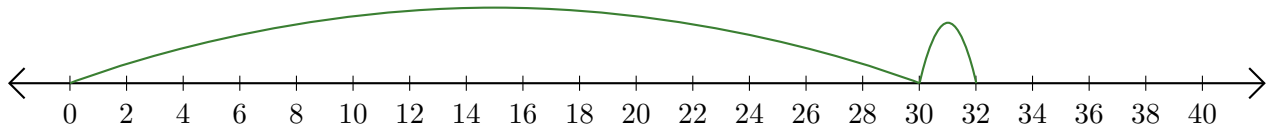
5. $20 + 6 = \underline{\quad}$



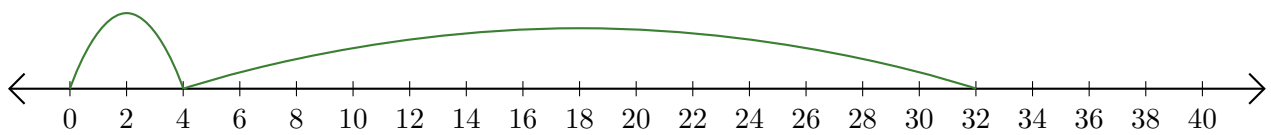
Sumar en Rectas Numéricas (A) Respuestas

Use las rectas numéricas para calcular cada suma.

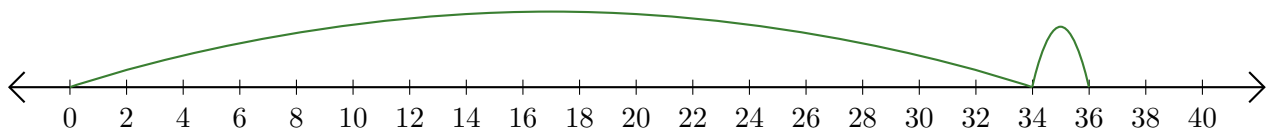
1. $30 + 2 = \underline{32}$




2. $4 + 28 = \underline{32}$



3. $34 + 2 = \underline{36}$



4. $8 + 4 = \underline{12}$



5. $20 + 6 = \underline{26}$

