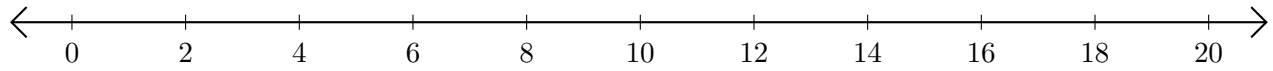


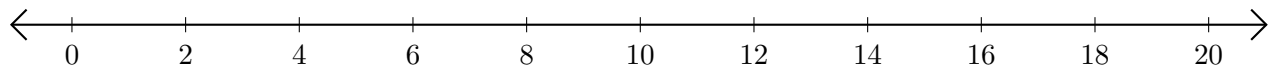
Sumar en Rectas Numéricas (H)

Use las rectas numéricas para calcular cada suma.

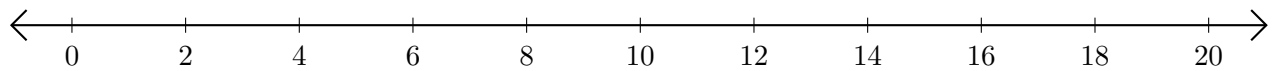
1. $12 + 6 = \underline{\quad}$



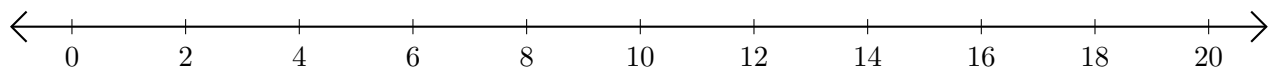
2. $14 + 6 = \underline{\quad}$



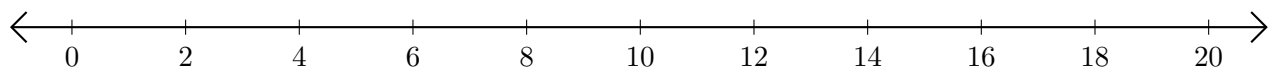
3. $4 + 12 = \underline{\quad}$



4. $2 + 8 = \underline{\quad}$



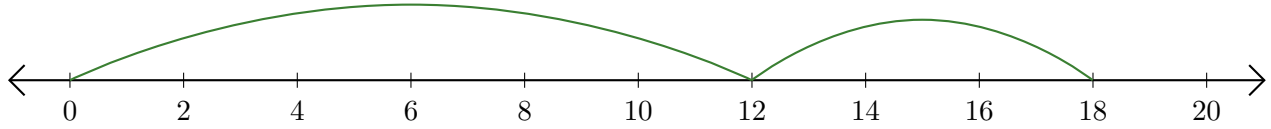
5. $6 + 4 = \underline{\quad}$



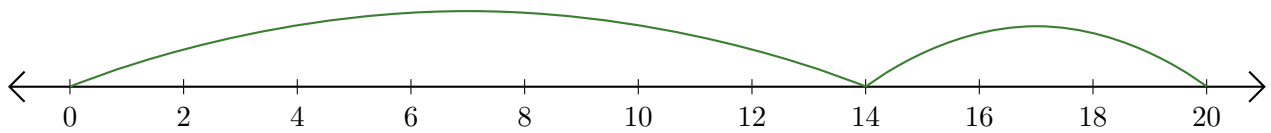
Sumar en Rectas Numéricas (H) Respuestas

Use las rectas numéricas para calcular cada suma.

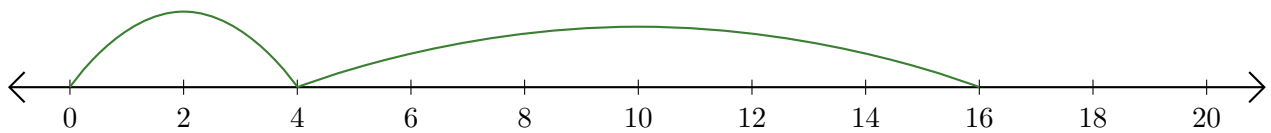
1. $12 + 6 = \underline{18}$



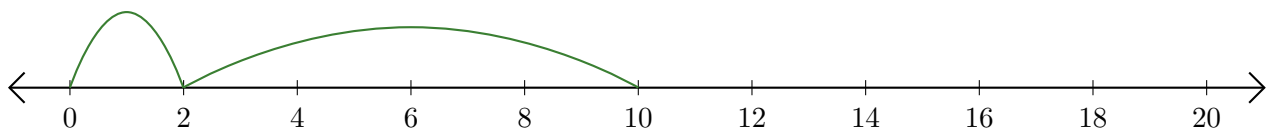
2. $14 + 6 = \underline{20}$



3. $4 + 12 = \underline{16}$



4. $2 + 8 = \underline{10}$



5. $6 + 4 = \underline{10}$

