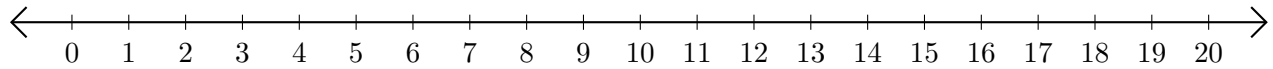


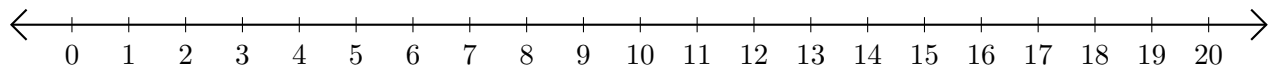
Sumar en Rectas Numéricas (J)

Use las rectas numéricas para calcular cada suma.

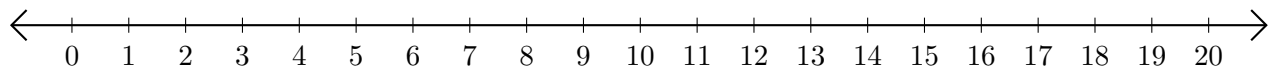
1. $16 + 1 = \underline{\quad}$



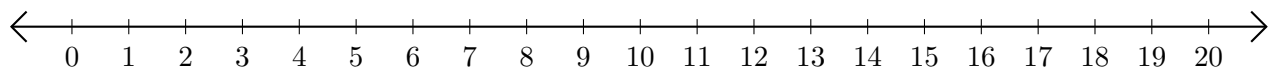
2. $6 + 10 = \underline{\quad}$



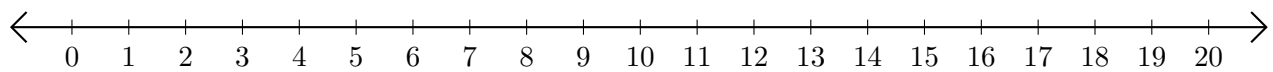
3. $9 + 4 = \underline{\quad}$



4. $4 + 8 = \underline{\quad}$



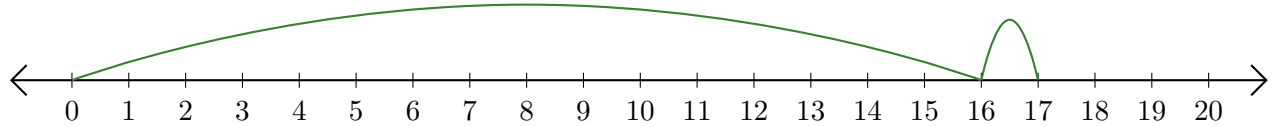
5. $1 + 12 = \underline{\quad}$



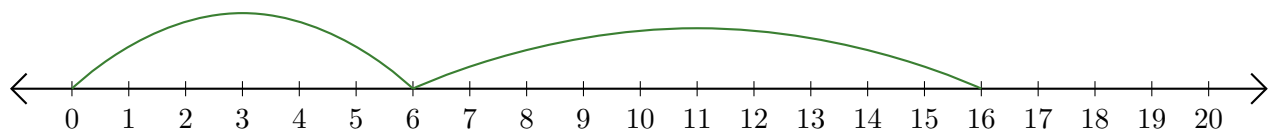
Sumar en Rectas Numéricas (J) Respuestas

Use las rectas numéricas para calcular cada suma.

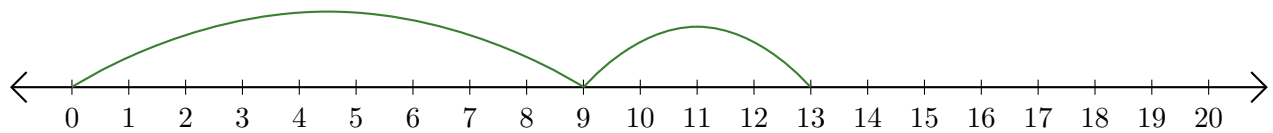
1. $16 + 1 = \underline{17}$



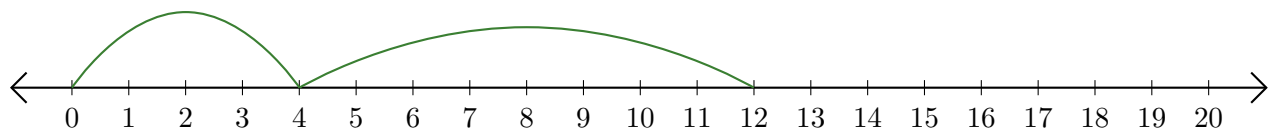
2. $6 + 10 = \underline{16}$



3. $9 + 4 = \underline{13}$



4. $4 + 8 = \underline{12}$



5. $1 + 12 = \underline{13}$

