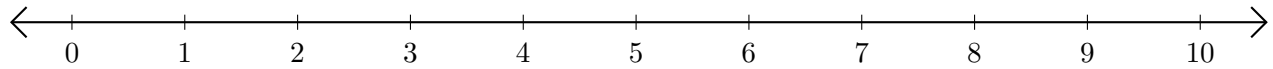


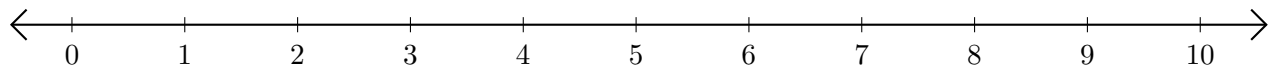
Sumar en Rectas Numéricas (J)

Use las rectas numéricas para calcular cada suma.

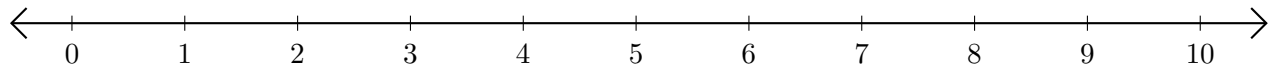
1. $2 + 2 = \underline{\quad}$



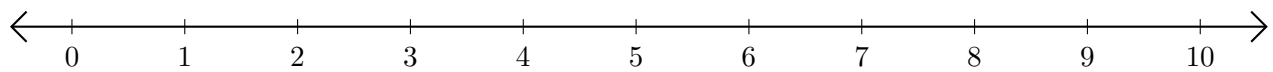
2. $1 + 3 = \underline{\quad}$



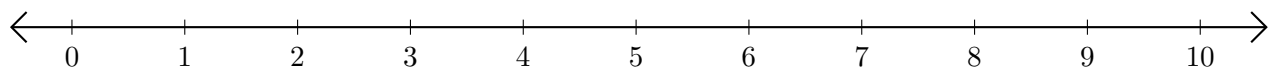
3. $8 + 1 = \underline{\quad}$



4. $5 + 3 = \underline{\quad}$



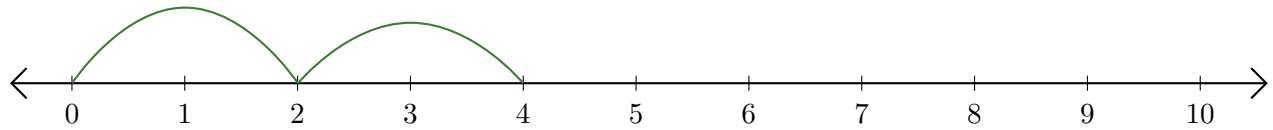
5. $3 + 3 = \underline{\quad}$



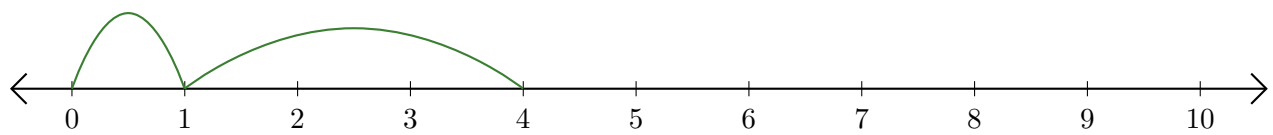
Sumar en Rectas Numéricas (J) Respuestas

Use las rectas numéricas para calcular cada suma.

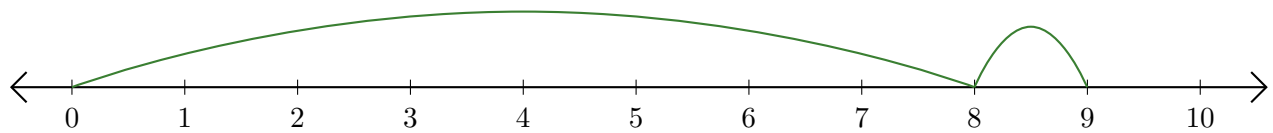
1. $2 + 2 = \underline{4}$



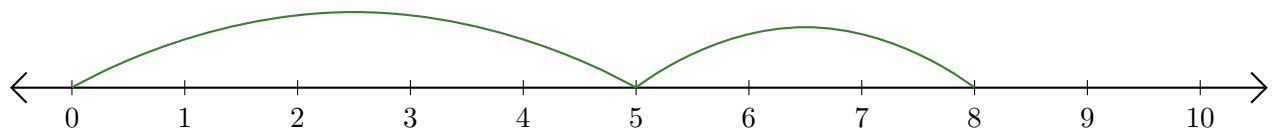
2. $1 + 3 = \underline{4}$



3. $8 + 1 = \underline{9}$



4. $5 + 3 = \underline{8}$



5. $3 + 3 = \underline{6}$

