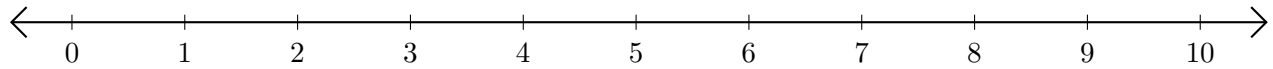


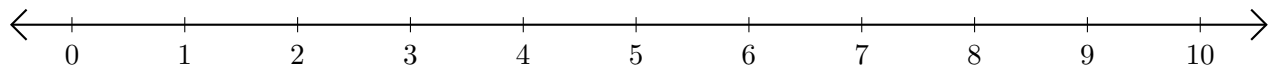
Sumar en Rectas Numéricas (G)

Use las rectas numéricas para calcular cada suma.

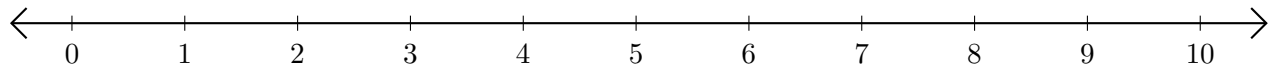
1. $9 + 1 = \underline{\quad}$



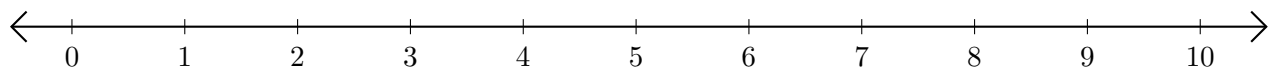
2. $4 + 5 = \underline{\quad}$



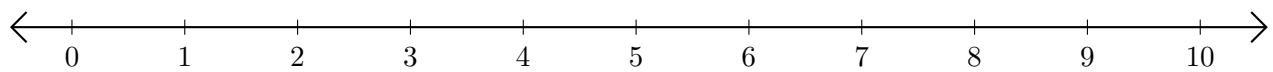
3. $7 + 1 = \underline{\quad}$



4. $2 + 3 = \underline{\quad}$



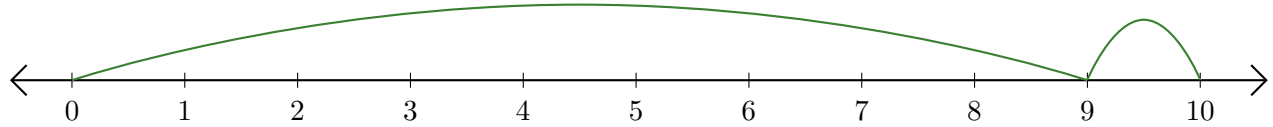
5. $3 + 1 = \underline{\quad}$



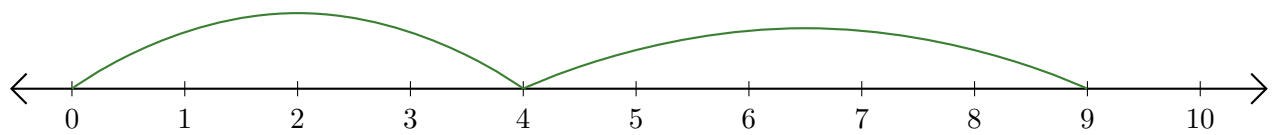
Sumar en Rectas Numéricas (G) Respuestas

Use las rectas numéricas para calcular cada suma.

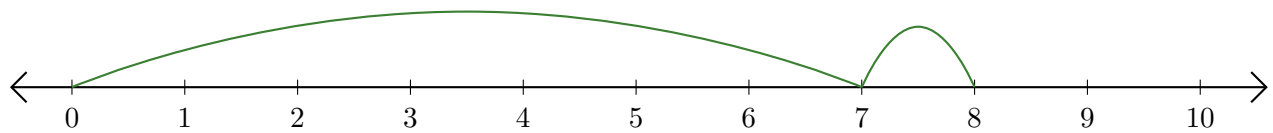
1. $9 + 1 = \underline{10}$



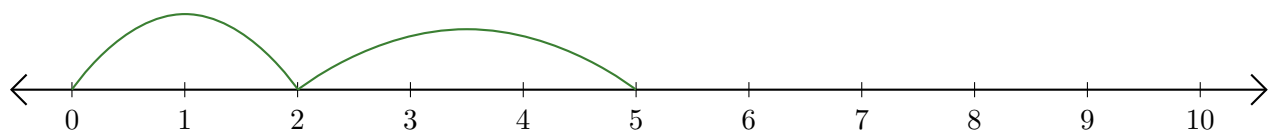
2. $4 + 5 = \underline{9}$



3. $7 + 1 = \underline{8}$



4. $2 + 3 = \underline{5}$



5. $3 + 1 = \underline{4}$

