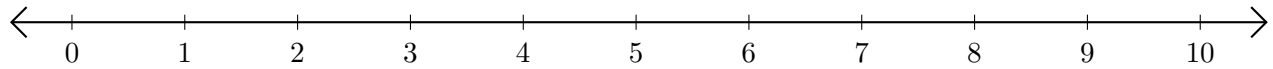


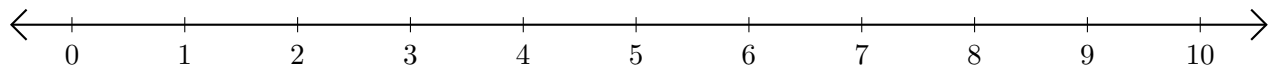
# Sumar en Rectas Numéricas (E)

Use las rectas numéricas para calcular cada suma.

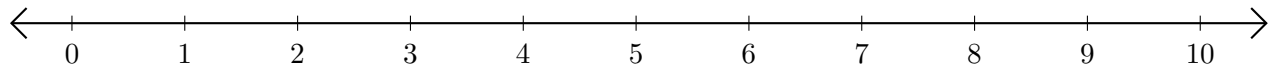
1.  $7 + 3 = \underline{\quad}$



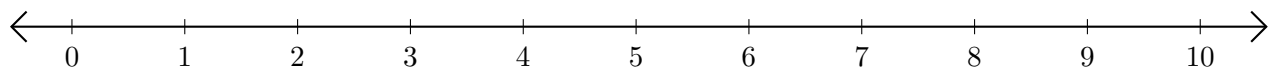
2.  $2 + 8 = \underline{\quad}$



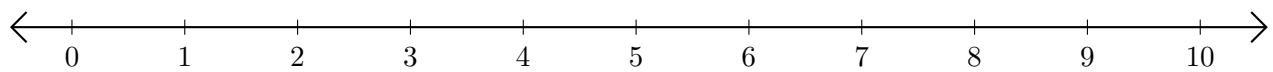
3.  $6 + 2 = \underline{\quad}$



4.  $1 + 1 = \underline{\quad}$



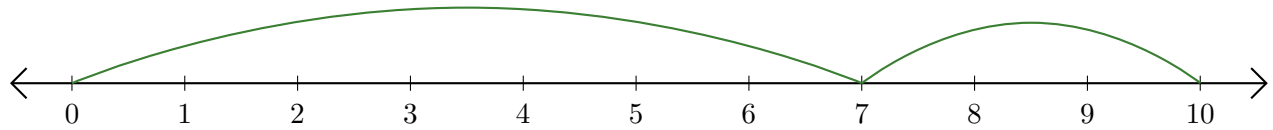
5.  $4 + 5 = \underline{\quad}$



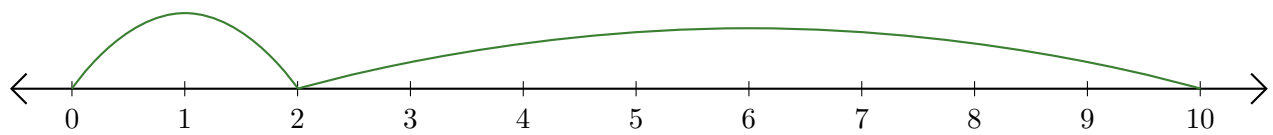
# Sumar en Rectas Numéricas (E) Respuestas

Use las rectas numéricas para calcular cada suma.

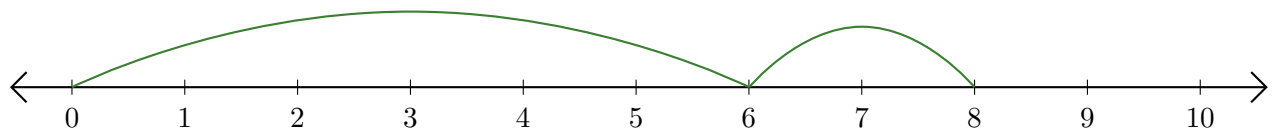
1.  $7 + 3 = \underline{10}$



2.  $2 + 8 = \underline{10}$



3.  $6 + 2 = \underline{8}$



4.  $1 + 1 = \underline{2}$



5.  $4 + 5 = \underline{9}$

