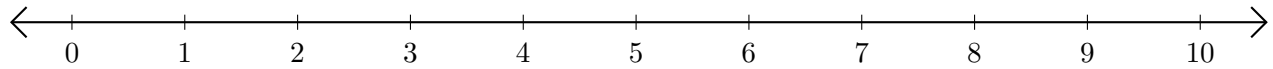


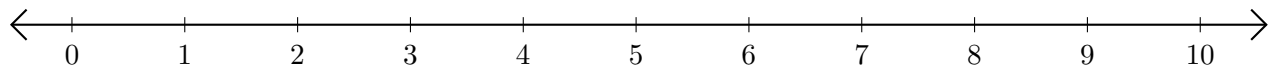
Sumar en Rectas Numéricas (D)

Use las rectas numéricas para calcular cada suma.

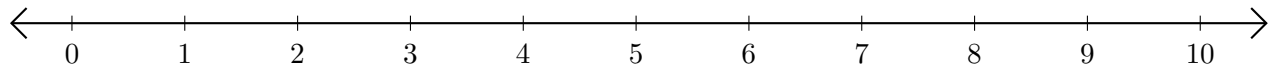
1. $1 + 9 = \underline{\quad}$



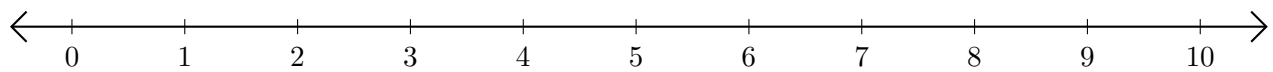
2. $3 + 5 = \underline{\quad}$



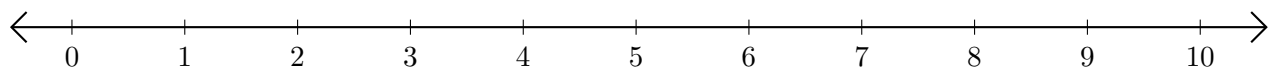
3. $5 + 1 = \underline{\quad}$



4. $6 + 1 = \underline{\quad}$



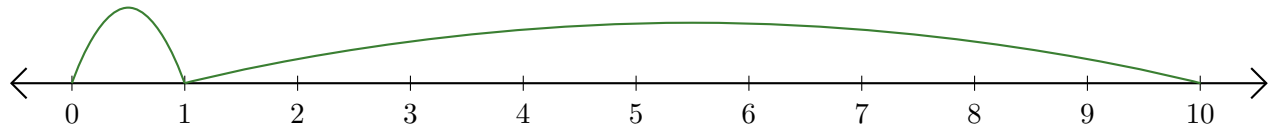
5. $7 + 3 = \underline{\quad}$



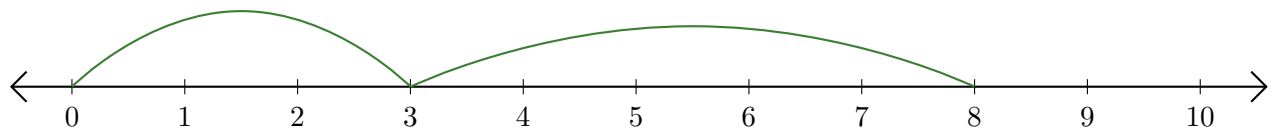
Sumar en Rectas Numéricas (D) Respuestas

Use las rectas numéricas para calcular cada suma.

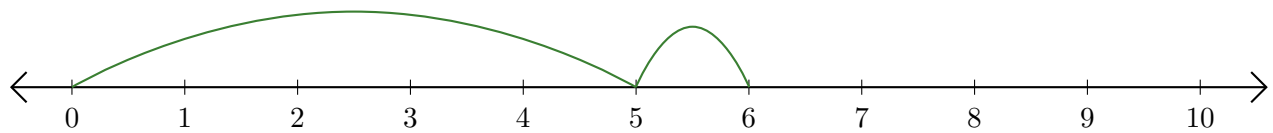
1. $1 + 9 = \underline{10}$



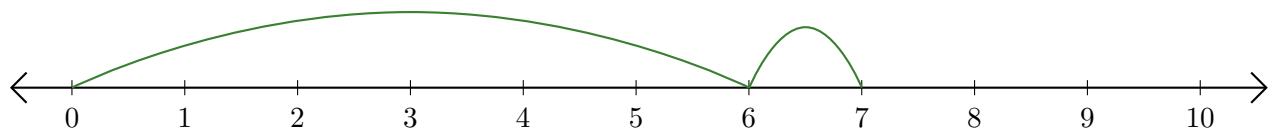
2. $3 + 5 = \underline{8}$



3. $5 + 1 = \underline{6}$



4. $6 + 1 = \underline{7}$



5. $7 + 3 = \underline{10}$

