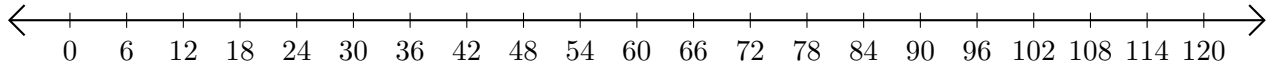


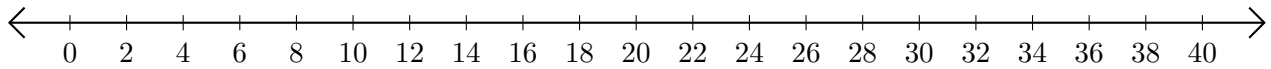
Restar en Rectas Numéricas (A)

Use las rectas numéricas para calcular cada diferencia.

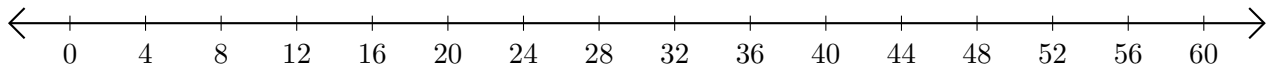
1. $108 - 78 = \underline{\quad}$



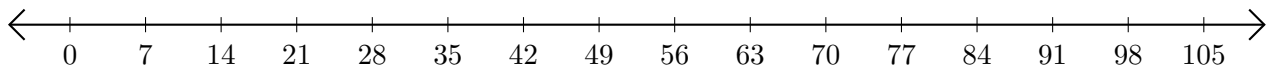
2. $26 - 20 = \underline{\quad}$



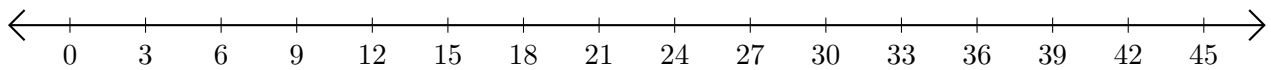
3. $48 - 8 = \underline{\quad}$



4. $77 - 35 = \underline{\quad}$



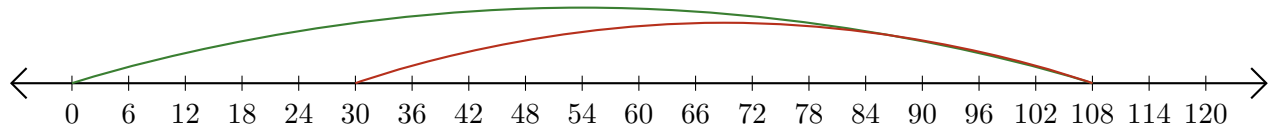
5. $45 - 36 = \underline{\quad}$



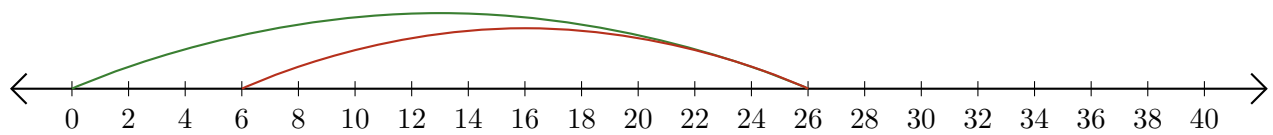
Restar en Rectas Numéricas (A) Respuestas

Use las rectas numéricas para calcular cada diferencia.

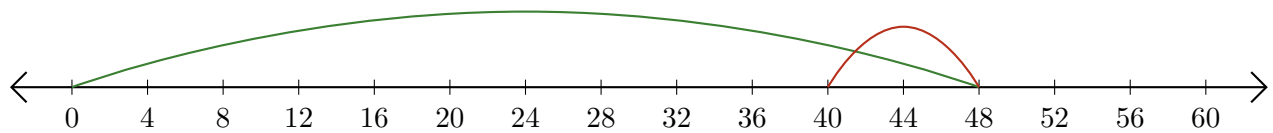
1. $108 - 78 = \underline{30}$



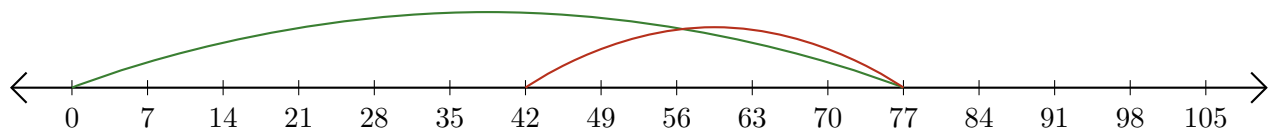
2. $26 - 20 = \underline{6}$



3. $48 - 8 = \underline{40}$



4. $77 - 35 = \underline{42}$



5. $45 - 36 = \underline{9}$

