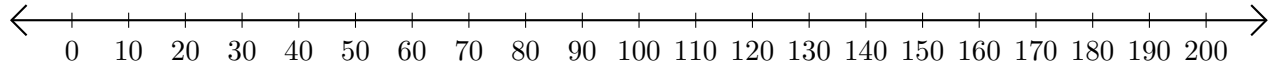


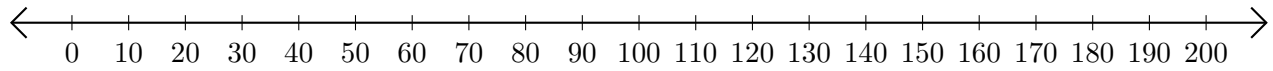
Restar en Rectas Numéricas (C)

Use las rectas numéricas para calcular cada diferencia.

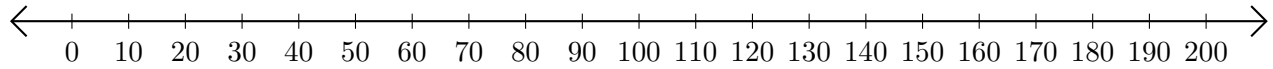
1. $50 - 40 = \underline{\quad}$



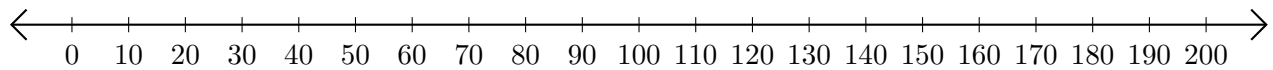
2. $200 - 190 = \underline{\quad}$



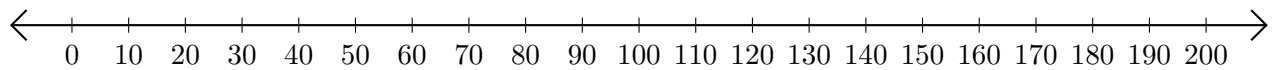
3. $140 - 120 = \underline{\quad}$



4. $190 - 70 = \underline{\quad}$




5. $70 - 60 = \underline{\quad}$



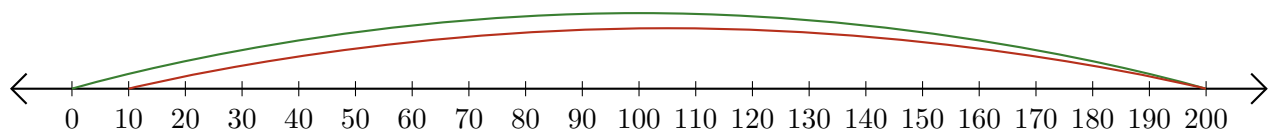
Restar en Rectas Numéricas (C) Respuestas

Use las rectas numéricas para calcular cada diferencia.

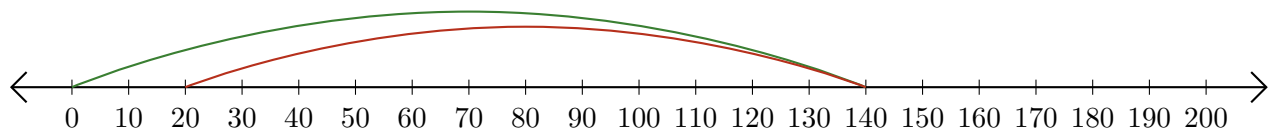
1. $50 - 40 = \underline{10}$



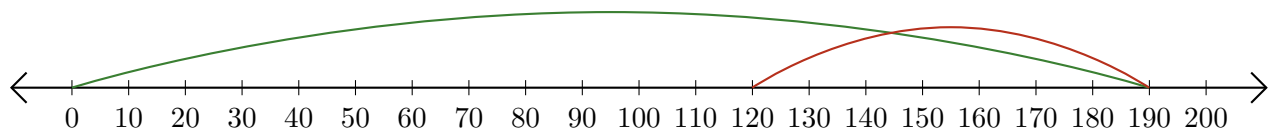
2. $200 - 190 = \underline{10}$



3. $140 - 120 = \underline{20}$



4. $190 - 70 = \underline{120}$



5. $70 - 60 = \underline{10}$

