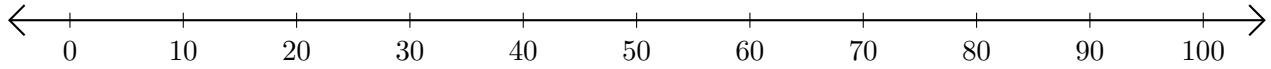


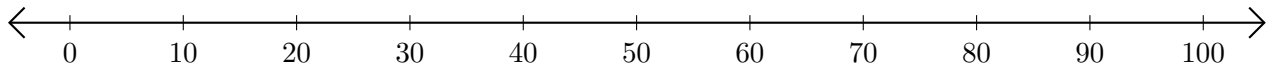
Restar en Rectas Numéricas (H)

Use las rectas numéricas para calcular cada diferencia.

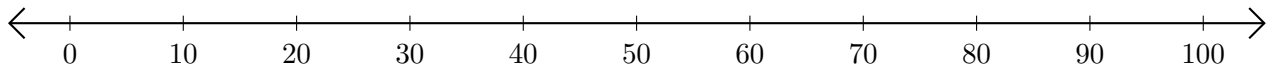
1. $100 - 30 = \underline{\quad}$



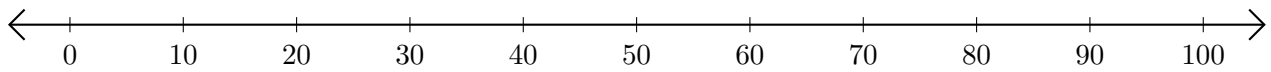
2. $20 - 10 = \underline{\quad}$



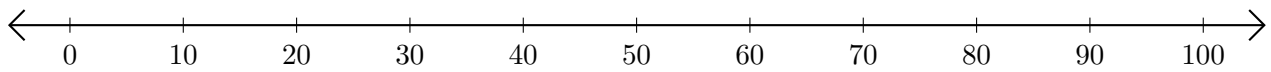
3. $50 - 40 = \underline{\quad}$



4. $70 - 60 = \underline{\quad}$



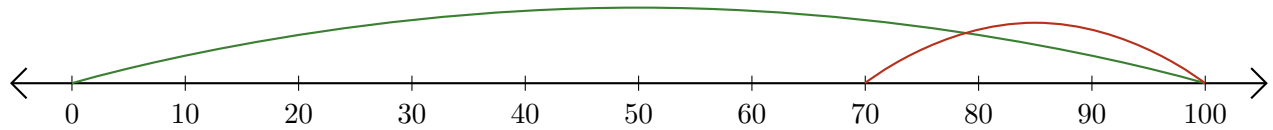
5. $60 - 50 = \underline{\quad}$



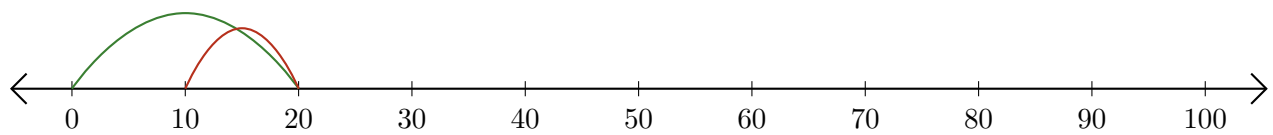
Restar en Rectas Numéricas (H) Respuestas

Use las rectas numéricas para calcular cada diferencia.

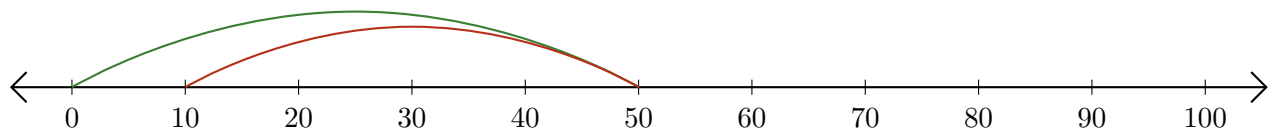
1. $100 - 30 = \underline{70}$



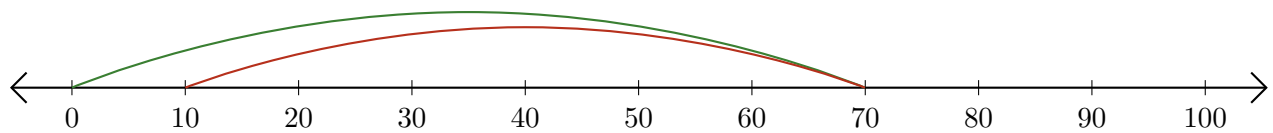
2. $20 - 10 = \underline{10}$



3. $50 - 40 = \underline{10}$



4. $70 - 60 = \underline{10}$



5. $60 - 50 = \underline{10}$

