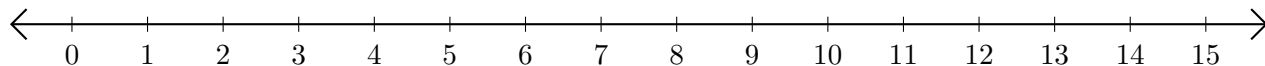


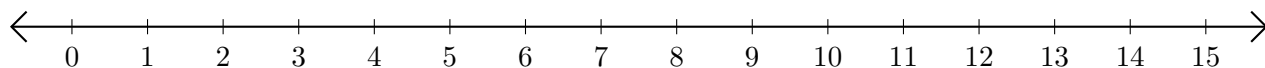
Restar en Rectas Numéricas (I)

Use las rectas numéricas para calcular cada diferencia.

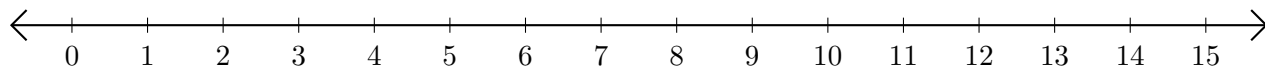
1. $12 - 6 = \underline{\quad}$



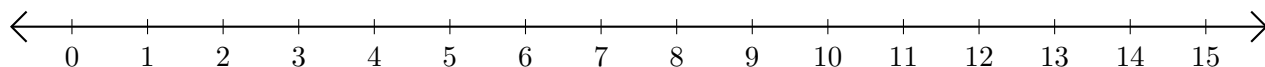
2. $11 - 3 = \underline{\quad}$



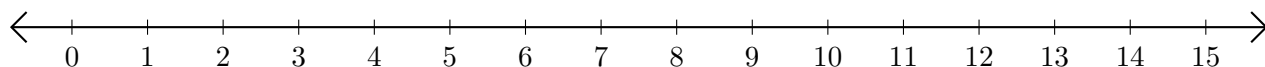
3. $15 - 12 = \underline{\quad}$



4. $14 - 10 = \underline{\quad}$



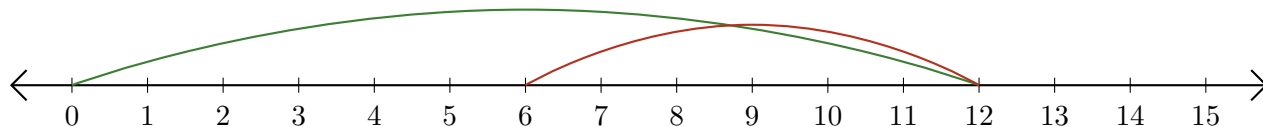
5. $15 - 14 = \underline{\quad}$



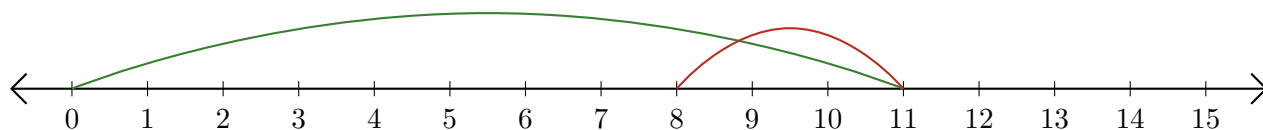
Restar en Rectas Numéricas (I) Respuestas

Use las rectas numéricas para calcular cada diferencia.

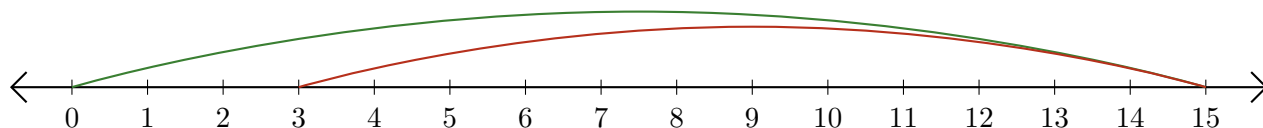
1. $12 - 6 = \underline{6}$



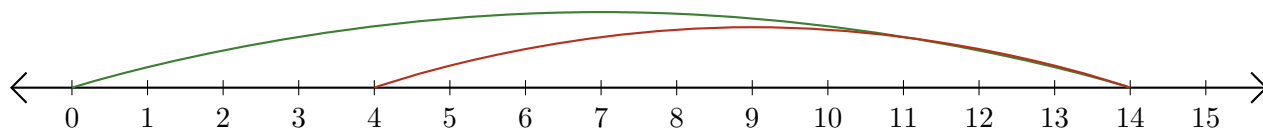
2. $11 - 3 = \underline{8}$



3. $15 - 12 = \underline{3}$



4. $14 - 10 = \underline{4}$



5. $15 - 14 = \underline{1}$

