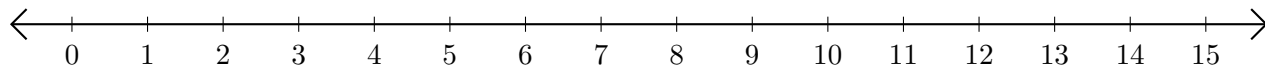


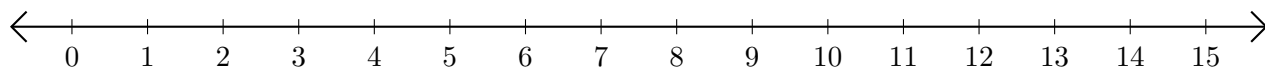
Restar en Rectas Numéricas (E)

Use las rectas numéricas para calcular cada diferencia.

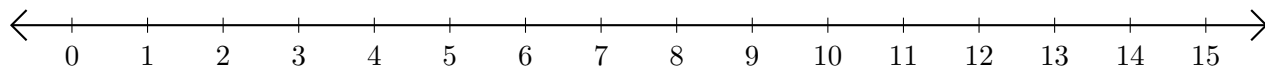
1. $15 - 14 = \underline{\quad}$



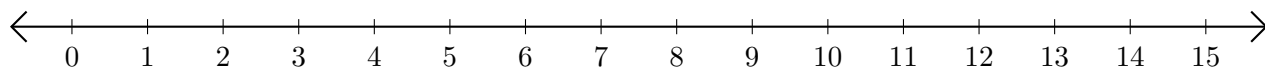
2. $13 - 10 = \underline{\quad}$



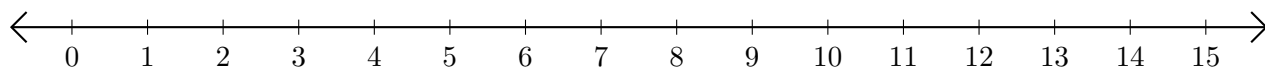
3. $14 - 13 = \underline{\quad}$



4. $6 - 1 = \underline{\quad}$



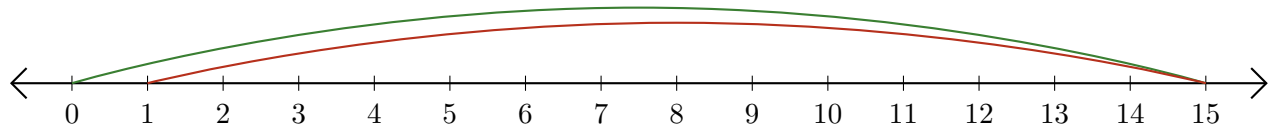
5. $13 - 8 = \underline{\quad}$



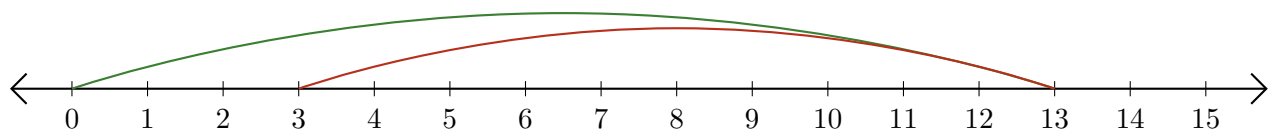
Restar en Rectas Numéricas (E) Respuestas

Use las rectas numéricas para calcular cada diferencia.

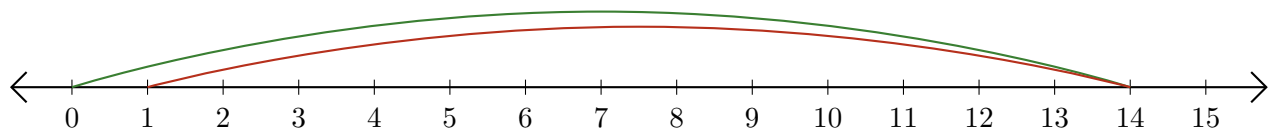
1. $15 - 14 = \underline{1}$



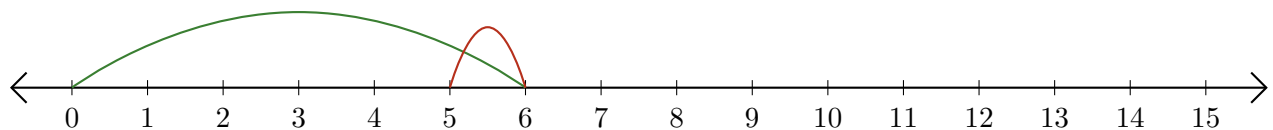
2. $13 - 10 = \underline{3}$



3. $14 - 13 = \underline{1}$



4. $6 - 1 = \underline{5}$



5. $13 - 8 = \underline{5}$

