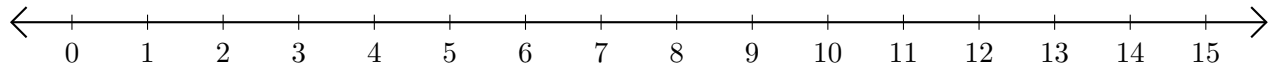


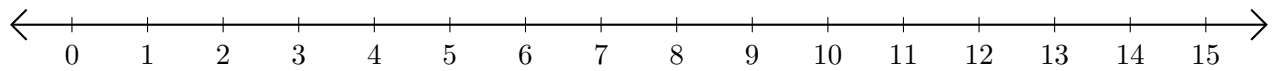
Restar en Rectas Numéricas (A)

Use las rectas numéricas para calcular cada diferencia.

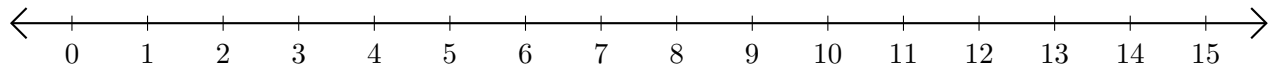
1. $15 - 5 = \underline{\quad}$



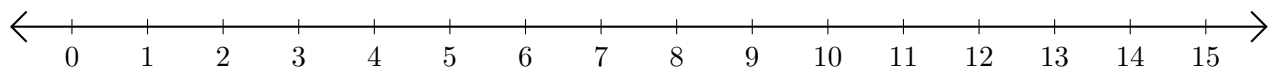
2. $6 - 4 = \underline{\quad}$



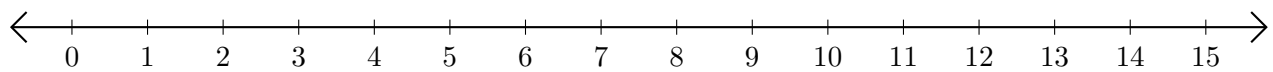
3. $14 - 10 = \underline{\quad}$



4. $12 - 1 = \underline{\quad}$



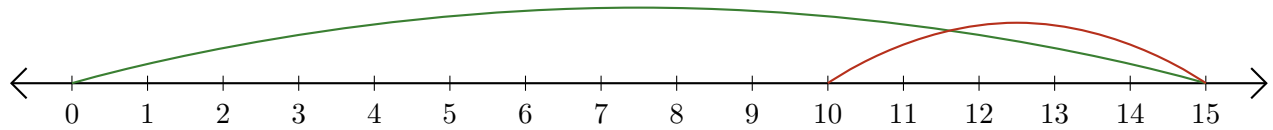
5. $9 - 8 = \underline{\quad}$



Restar en Rectas Numéricas (A) Respuestas

Use las rectas numéricas para calcular cada diferencia.

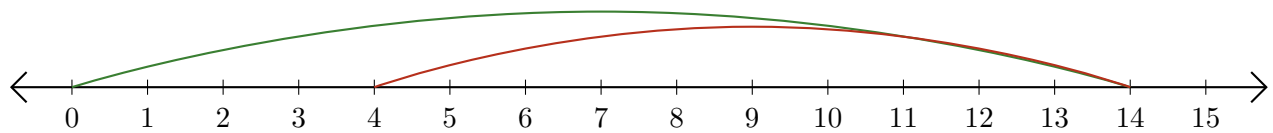
1. $15 - 5 = \underline{10}$



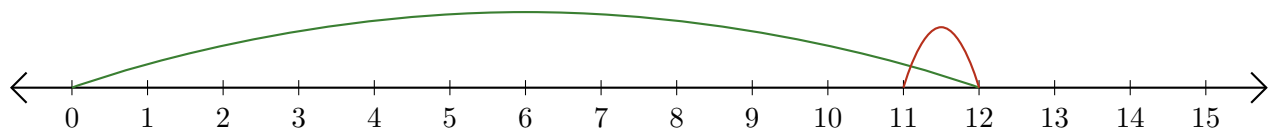
2. $6 - 4 = \underline{2}$



3. $14 - 10 = \underline{4}$



4. $12 - 1 = \underline{11}$



5. $9 - 8 = \underline{1}$

