

Representar la Hora (F)

Dibuje en cada reloj la hora que aparece debajo.

1.



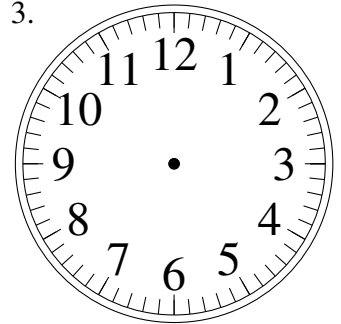
6:28.15

2.



8:11.15

3.



5:56.40

4.



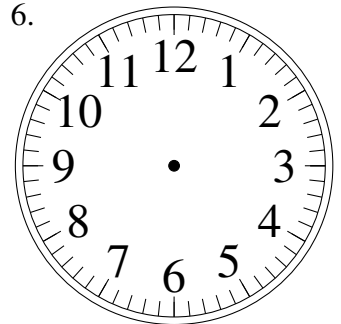
2:52.50

5.



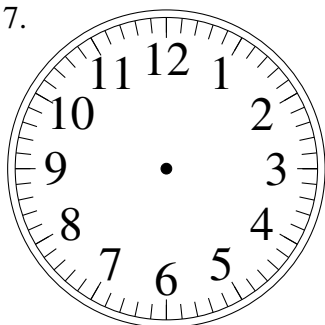
10:33.05

6.



8:42.40

7.



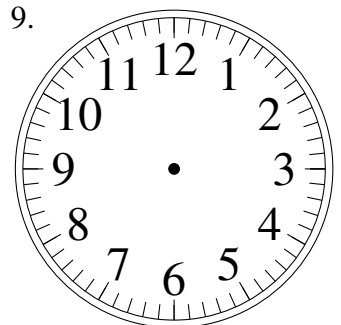
8:06.30

8.



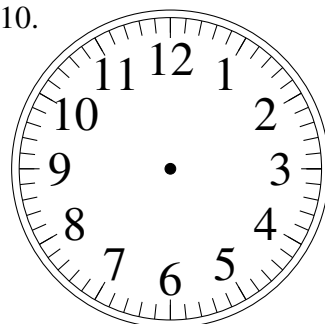
11:08.45

9.



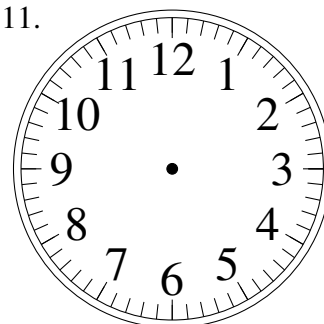
1:35.35

10.



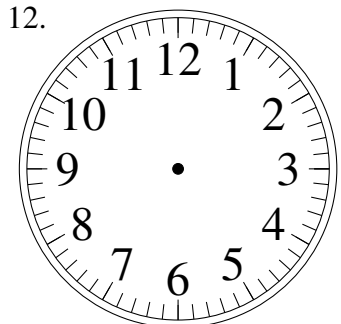
1:16.55

11.



7:47.25

12.



10:04.20