

Representar la Hora (D)

Dibuje en cada reloj la hora que aparece debajo.

1.



4:58.45

2.



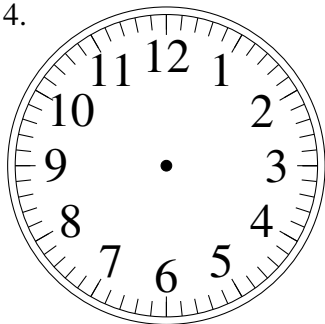
12:30.00

3.



1:28.40

4.



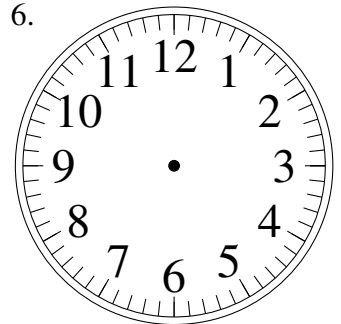
9:45.50

5.



10:27.05

6.



1:08.35

7.



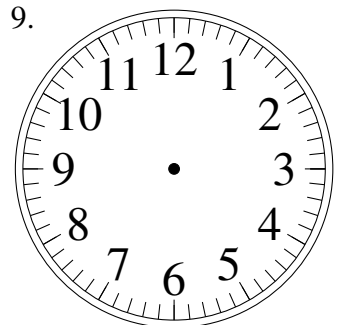
4:05.10

8.



3:38.10

9.



7:32.35

10.



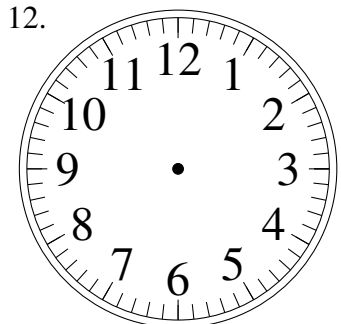
10:37.10

11.



12:58.00

12.



9:14.00