

Representar la Hora (A)

Dibuje en cada reloj la hora que aparece debajo.

1.



7:04.40

2.



1:20.30

3.



5:19.30

4.



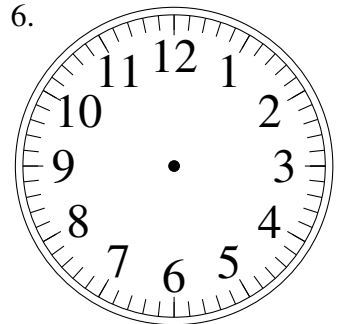
2:51.05

5.



4:06.30

6.



4:35.05

7.



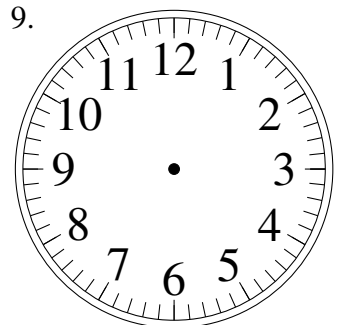
7:10.05

8.



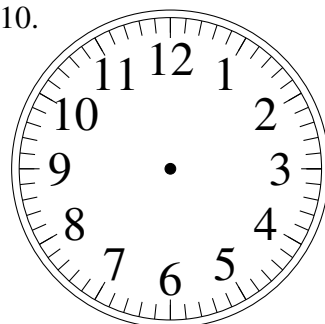
7:52.35

9.



8:18.05

10.



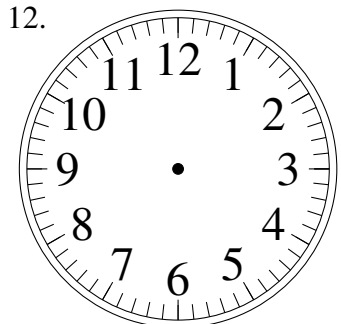
12:11.15

11.



11:53.55

12.

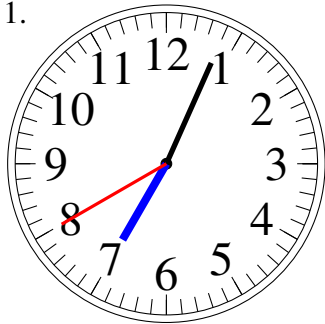


2:07.10

Representar la Hora (A) Respuestas

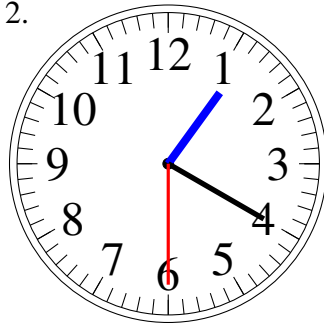
Dibuje en cada reloj la hora que aparece debajo.

1.



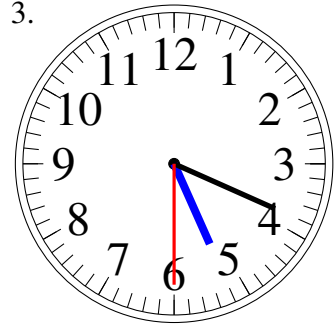
7:04.40

2.



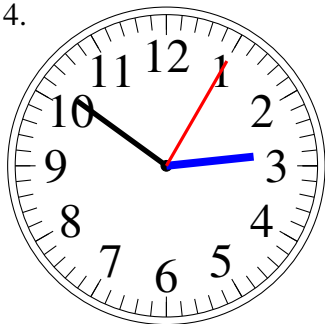
1:20.30

3.



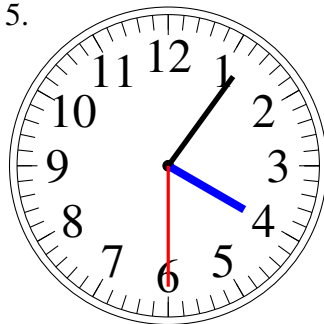
5:19.30

4.



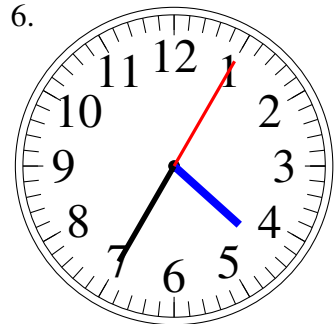
2:51.05

5.



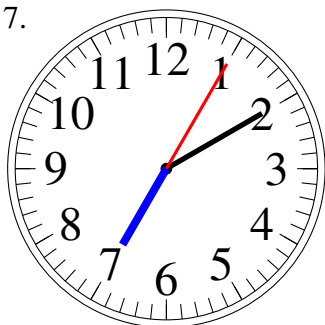
4:06.30

6.



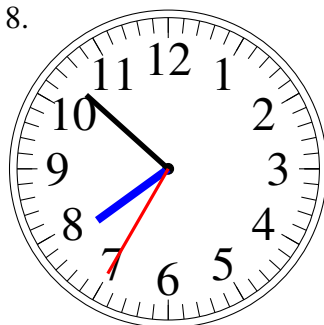
4:35.05

7.



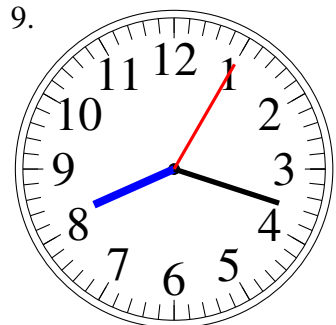
7:10.05

8.



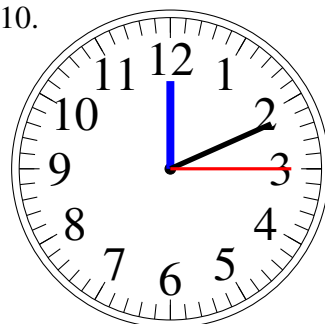
7:52.35

9.



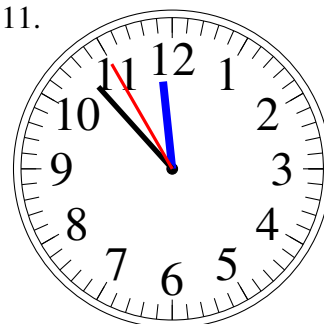
8:18.05

10.



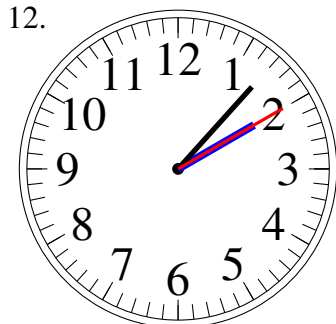
12:11.15

11.



11:53.55

12.



2:07.10