

# Representar la Hora (F)

Dibuje en cada reloj la hora que aparece debajo.

1.



6:15

2.



2:45

3.



10:00

4.



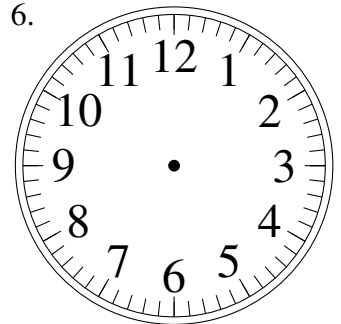
8:00

5.



1:15

6.



11:30

7.



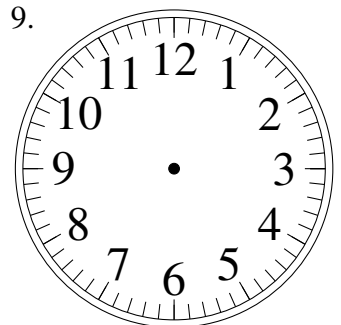
4:45

8.



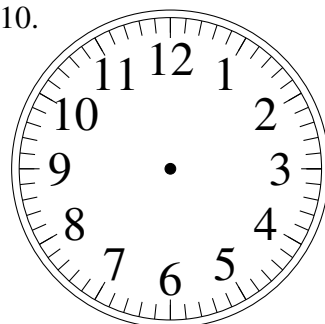
10:00

9.



9:15

10.



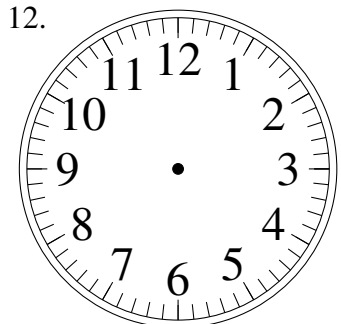
10:30

11.



7:30

12.



8:45