

# Representar la Hora (B)

Dibuje en cada reloj la hora que aparece debajo.

1.



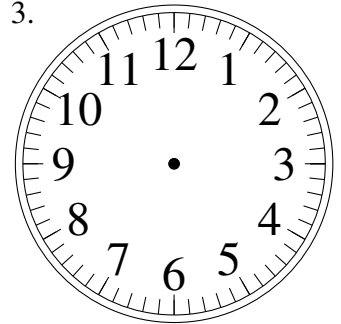
7:00

2.



12:00

3.



7:45

4.



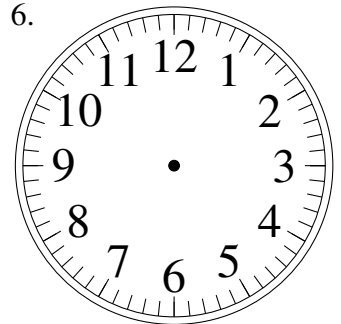
8:15

5.



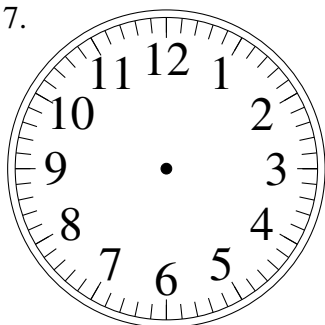
5:15

6.



10:45

7.



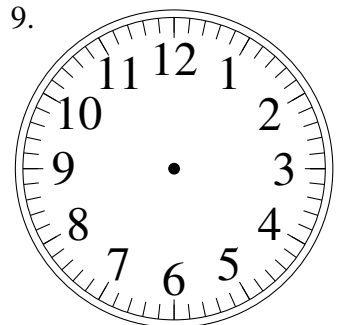
3:15

8.



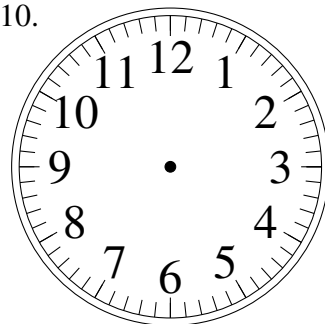
11:00

9.



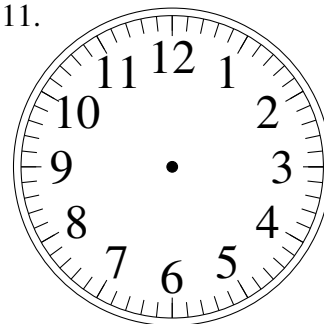
9:45

10.



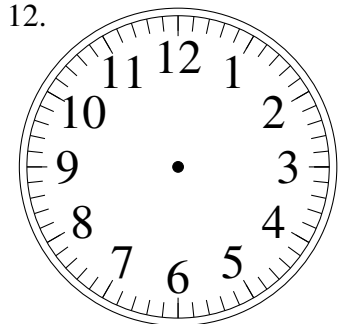
12:15

11.



10:15

12.



1:00