

Representar la Hora (A)

Dibuje en cada reloj la hora que aparece debajo.

1.



8:15

2.



4:15

3.



6:45

4.



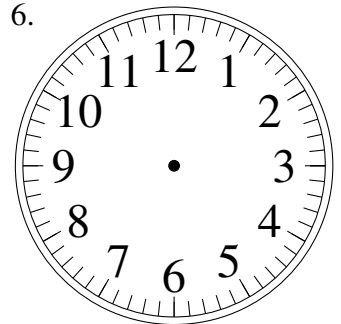
3:00

5.



5:45

6.



5:15

7.



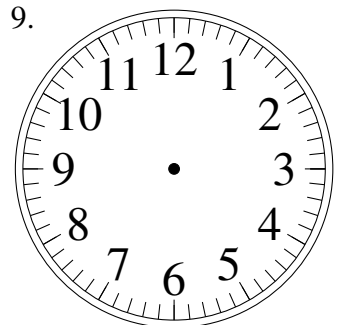
4:00

8.



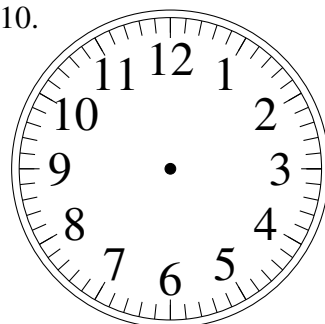
1:15

9.



6:00

10.



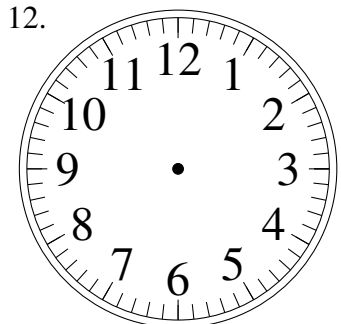
1:15

11.



12:15

12.



3:00