

# Representar la Hora (D)

Dibuje en cada reloj la hora que aparece debajo.

1.



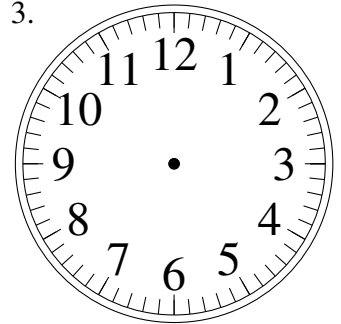
5:25

2.



5:15

3.



10:15

4.



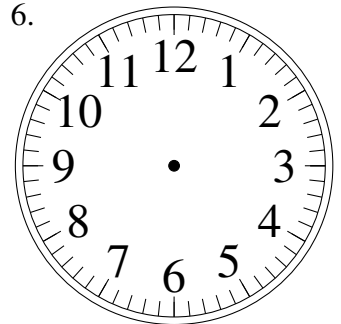
11:20

5.



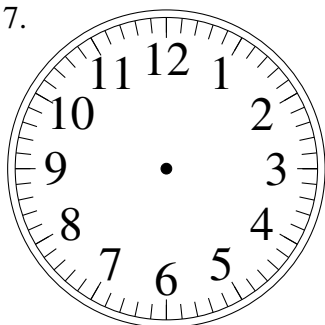
1:55

6.



1:45

7.



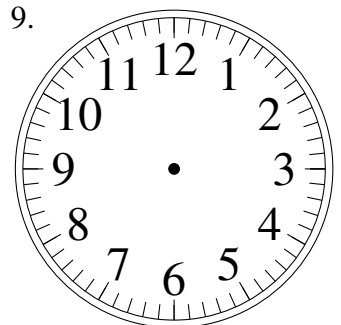
10:00

8.



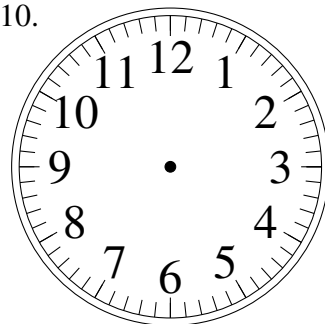
11:10

9.



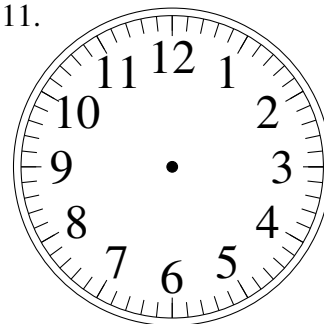
6:00

10.



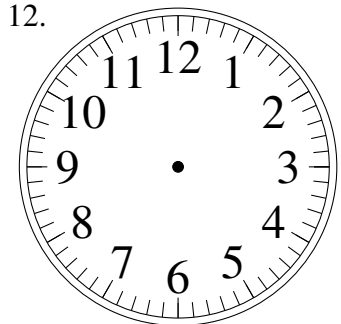
6:55

11.



4:20

12.



8:45