

Representar la Hora (B)

Dibuje en cada reloj la hora que aparece debajo.

1.



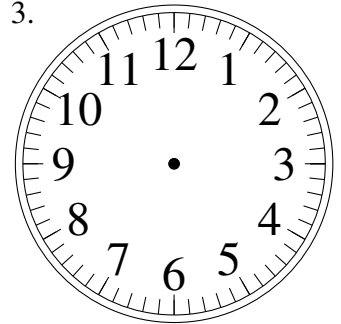
6:20

2.



1:55

3.



12:00

4.



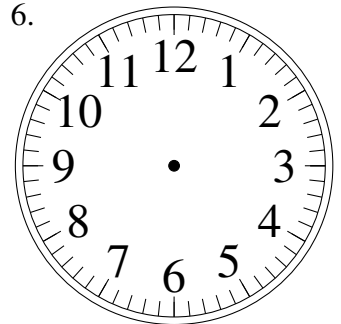
11:15

5.



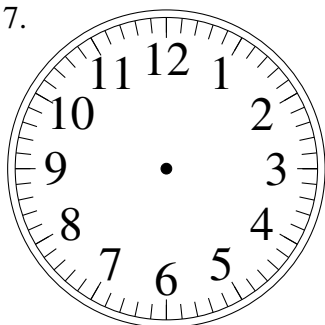
10:40

6.



1:05

7.



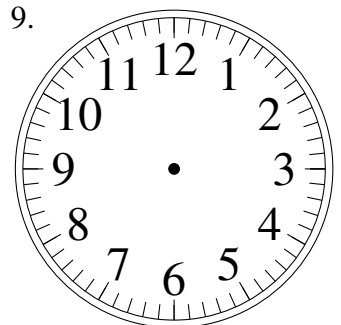
1:30

8.



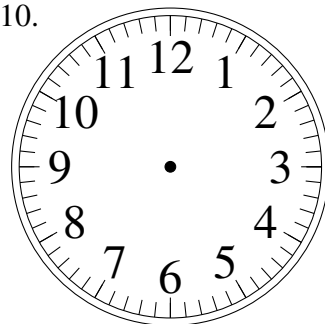
10:05

9.



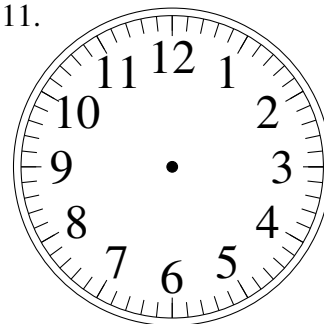
8:35

10.



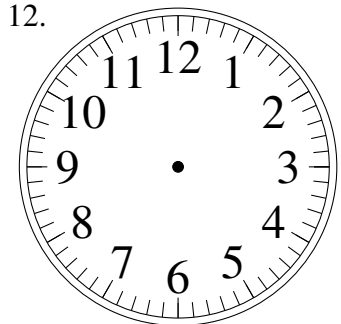
10:30

11.



4:55

12.



9:40