

Representar la Hora (A)

Dibuje en cada reloj la hora que aparece debajo.

1.



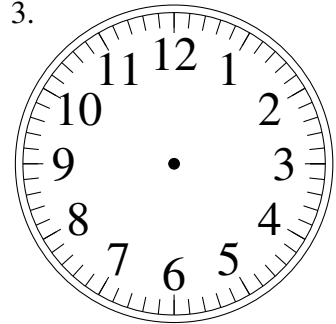
8:45

2.



11:15

3.



5:25

4.



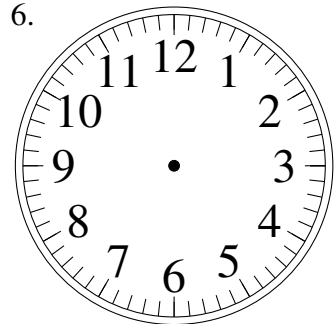
8:45

5.



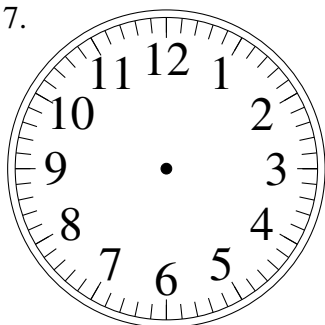
6:05

6.



1:50

7.



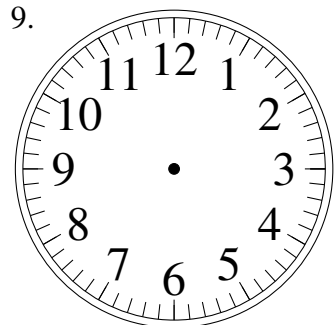
12:05

8.



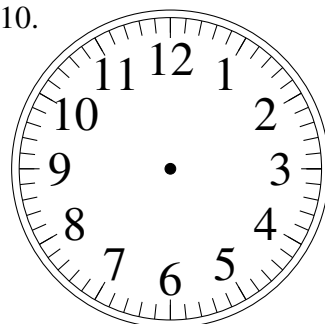
3:50

9.



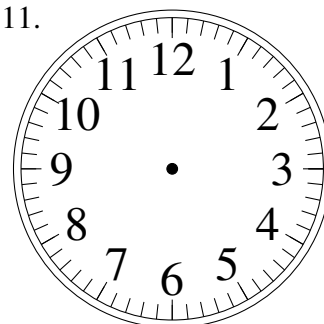
5:55

10.




8:45

11.



5:15

12.



9:25