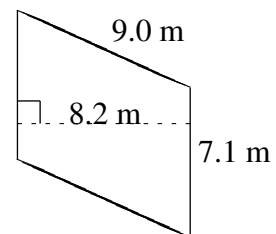
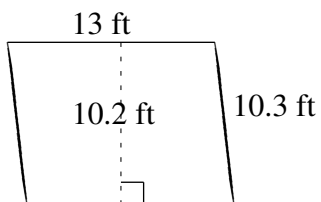
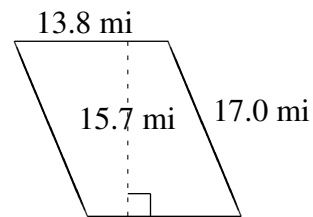
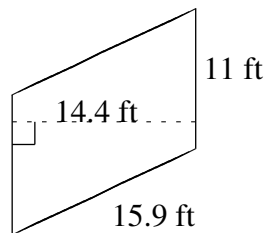
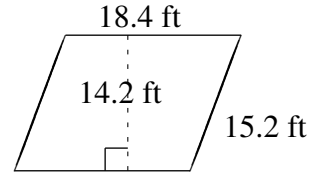
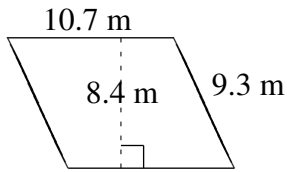


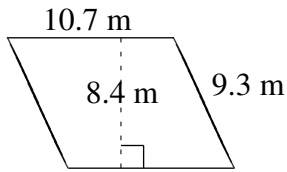
# Área y Perímetro de Paralelogramos (A)

Halle el área y el perímetro de cada paralelogramo.

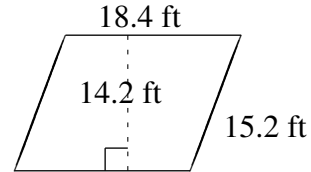


# Área y Perímetro de Paralelogramos (A) Respuestas

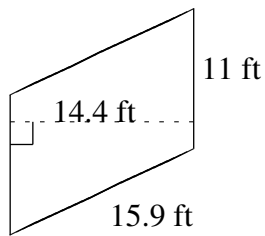
Halle el área y el perímetro de cada paralelogramo.



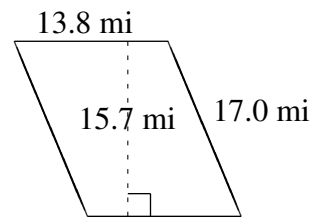
$$A = 89.88 \text{ m}^2$$
$$P = 40.0 \text{ m}$$



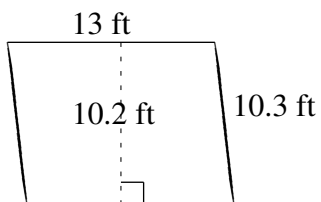
$$A = 261.28 \text{ ft}^2$$
$$P = 67.2 \text{ ft}$$



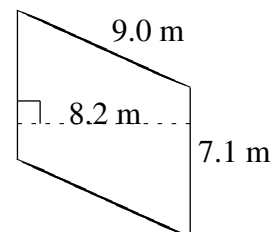
$$A = 158.4 \text{ ft}^2$$
$$P = 53.8 \text{ ft}$$



$$A = 216.66 \text{ mi}^2$$
$$P = 61.6 \text{ mi}$$



$$A = 132.6 \text{ ft}^2$$
$$P = 46.6 \text{ ft}$$



$$A = 58.22 \text{ m}^2$$
$$P = 32.2 \text{ m}$$