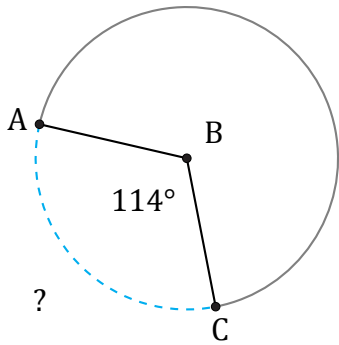


Longitud de Arcos (A)

Nombre: _____

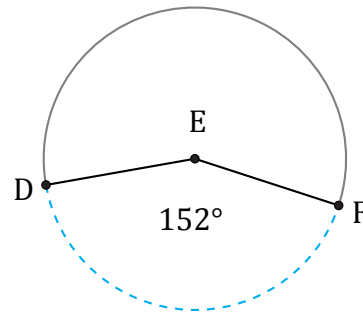
Fecha: _____

Calcule la longitud de cada arco.



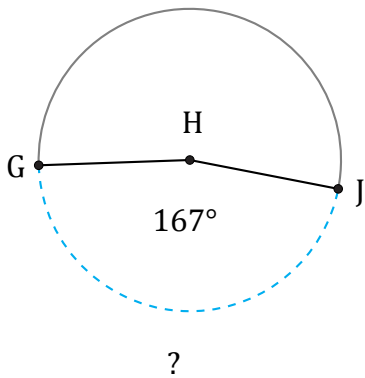
Radio = 33 km

$\widehat{AC} =$



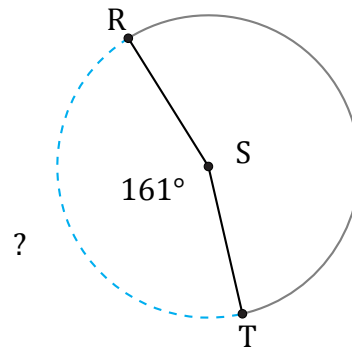
Diámetro = 1676 mm

$\widehat{DF} =$



Radio = 228 in

$\widehat{GJ} =$



Diámetro = 6 cm

$\widehat{RT} =$