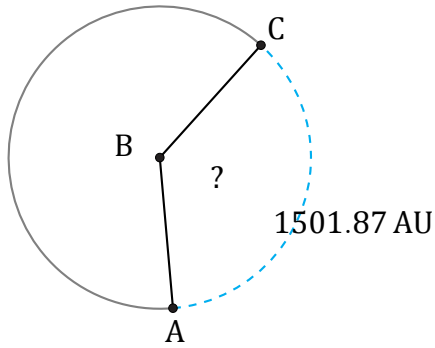


Amplitud de Arcos (J)

Nombre: _____

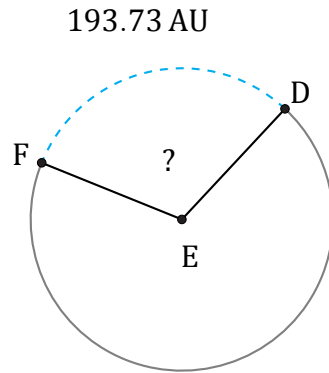
Fecha: _____

Calcule la amplitud angular de cada arco.



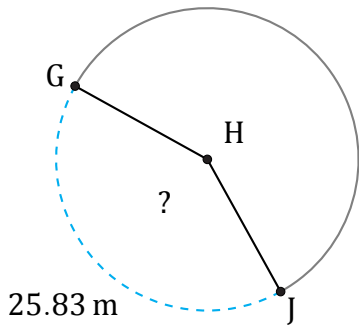
Radio = 647 AU

$\angle ABC =$



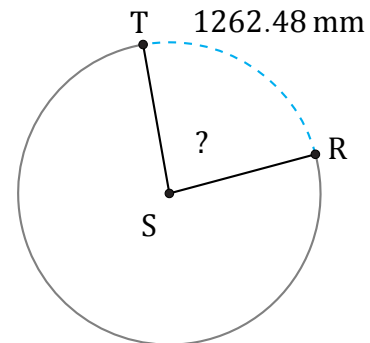
Radio = 100 AU

$\angle DEF =$



Radio = 10 m

$\angle GHJ =$



Radio = 851 mm

$\angle RST =$