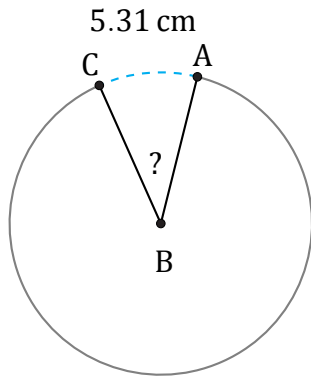


Amplitud de Arcos (A)

Nombre: _____

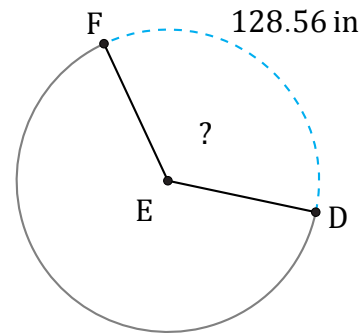
Fecha: _____

Calcule la amplitud angular de cada arco.



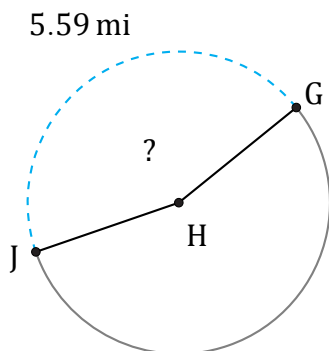
Radio = 8 cm

$\angle ABC =$



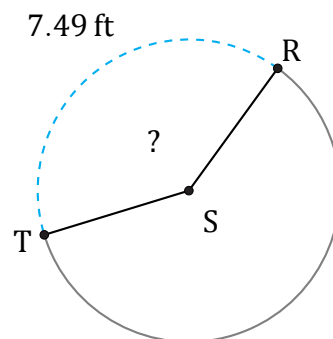
Radio = 58 in

$\angle DEF =$



Radio = 2 mi

$\angle GHJ =$



Radio = 3 ft

$\angle RST =$