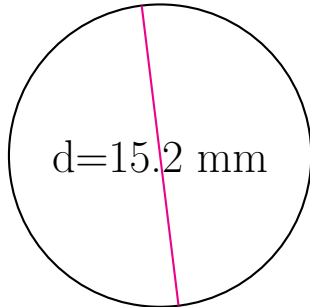


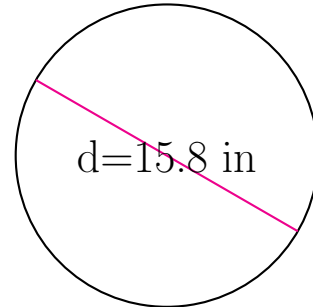
Área y Circunferencia de Círculos (A)

Calcule el área y la circunferencia de cada círculo.



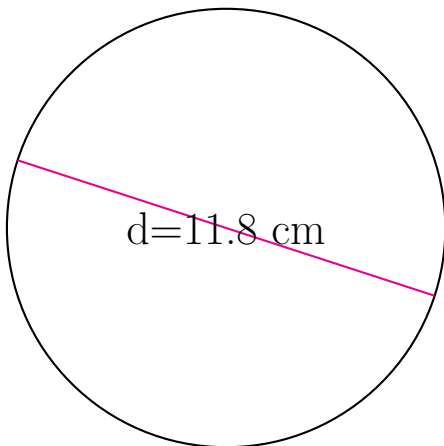
circunferencia = _____

área = _____



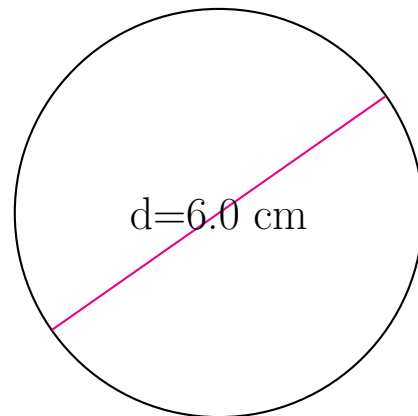
circunferencia = _____

área = _____



circunferencia = _____

área = _____

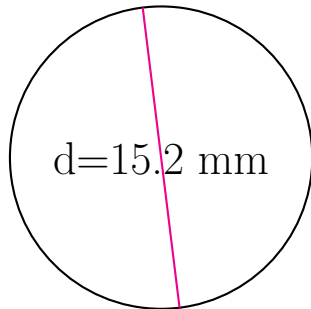


circunferencia = _____

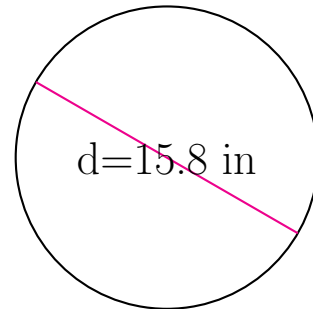
área = _____

Área y Circunferencia de Círculos (A) Respuestas

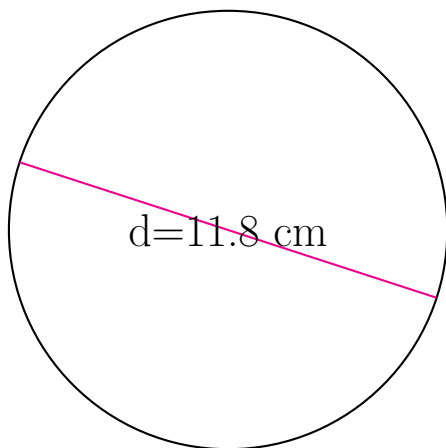
Calcule el área y la circunferencia de cada círculo.



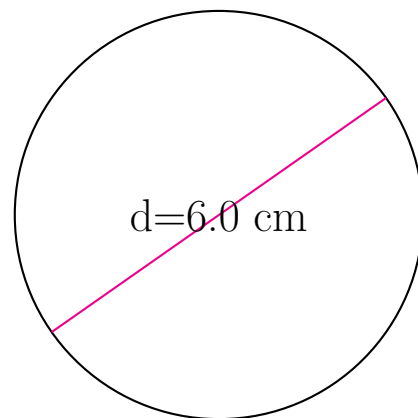
$$\begin{aligned} \text{circunferencia} &= \underline{47.752 \text{ mm}} \\ \text{área} &= \underline{181.458 \text{ mm}^2} \end{aligned}$$



$$\begin{aligned} \text{circunferencia} &= \underline{49.637 \text{ in}} \\ \text{área} &= \underline{196.067 \text{ in}^2} \end{aligned}$$



$$\begin{aligned} \text{circunferencia} &= \underline{37.071 \text{ cm}} \\ \text{área} &= \underline{109.359 \text{ cm}^2} \end{aligned}$$



$$\begin{aligned} \text{circunferencia} &= \underline{18.85 \text{ cm}} \\ \text{área} &= \underline{28.274 \text{ cm}^2} \end{aligned}$$