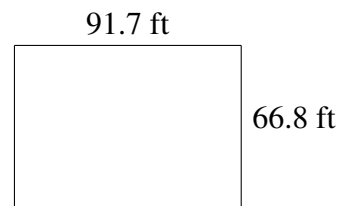
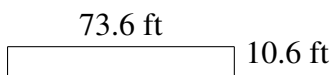
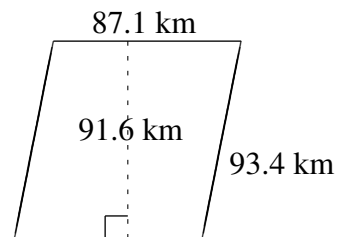
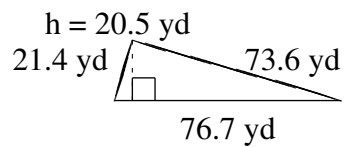
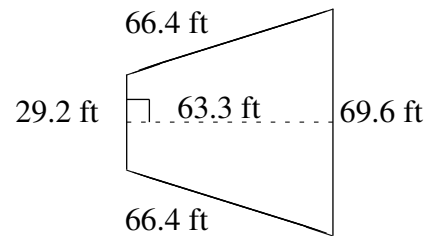
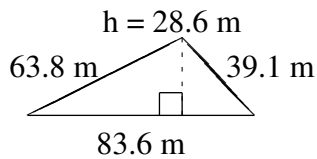


# Área y Perímetro de Formas Varias (C)

Halle el área y el perímetro de cada figura.



# Área y Perímetro de Formas Varias (C) Respuestas

Halle el área y el perímetro de cada figura.

