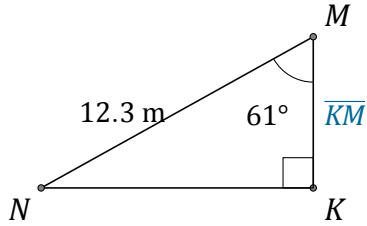


Funciones Trigonómicas (E)

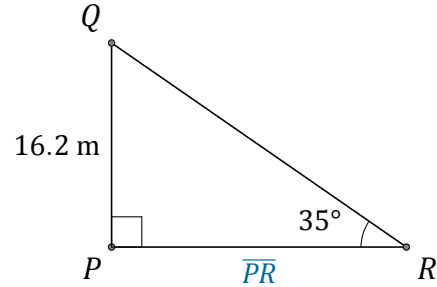
Nombre: _____

Fecha: _____

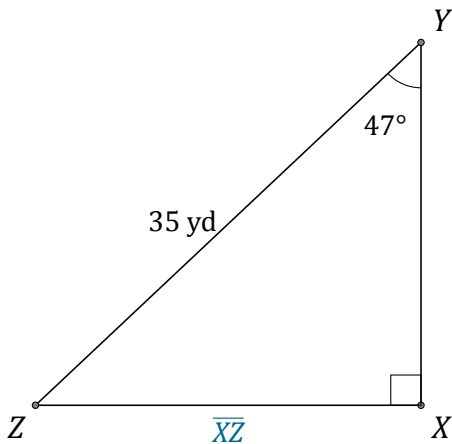
Calcule los valores de los lados usando funciones trigonométricas



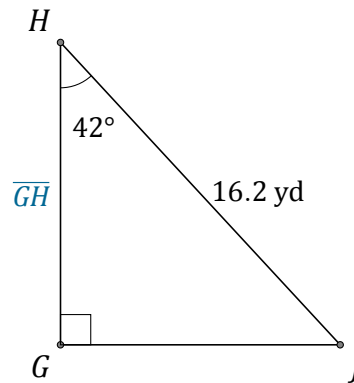
$$\overline{KM} = \underline{\hspace{2cm}}$$



$$\overline{PR} = \underline{\hspace{2cm}}$$



$$\overline{XZ} = \underline{\hspace{2cm}}$$



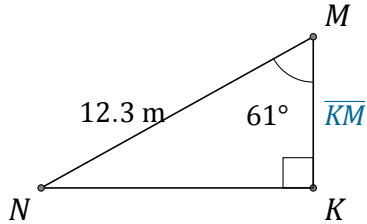
$$\overline{GH} = \underline{\hspace{2cm}}$$

Funciones Trigonómicas (E) Respuestas

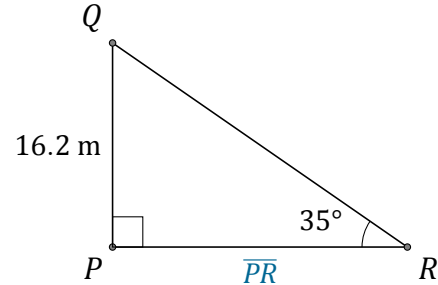
Nombre: _____

Fecha: _____

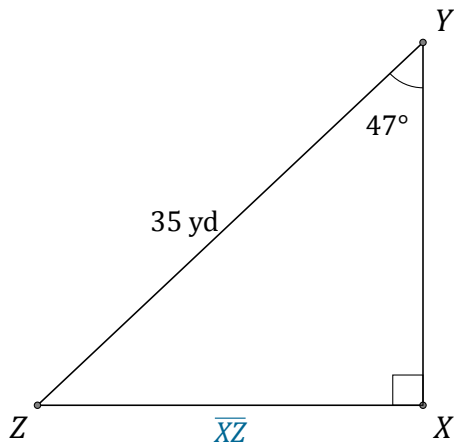
Calcule los valores de los lados usando funciones trigonométricas



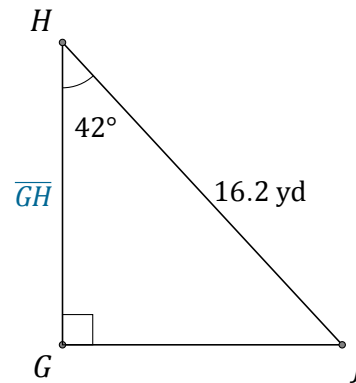
$$\overline{KM} = \underline{6\text{ m}}$$



$$\overline{PR} = \underline{23.1\text{ m}}$$



$$\overline{XZ} = \underline{25.6\text{ yd}}$$



$$\overline{GH} = \underline{12\text{ yd}}$$