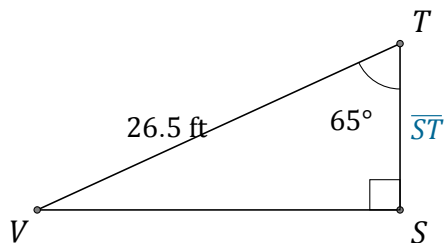


# Función Coseno (B)

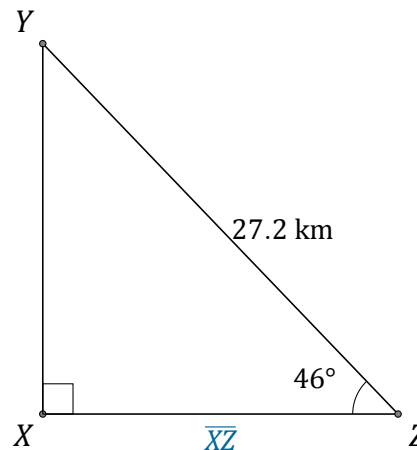
Nombre: \_\_\_\_\_

Fecha: \_\_\_\_\_

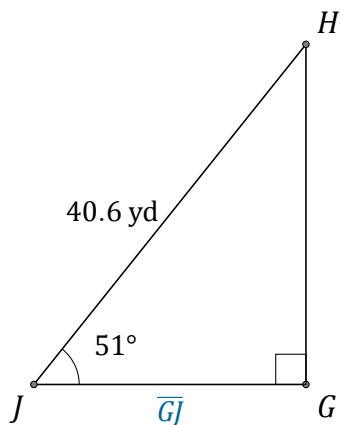
Calcule los valores de los lados usando la función coseno:  $\cos(\alpha) = \frac{C.A.}{H}$



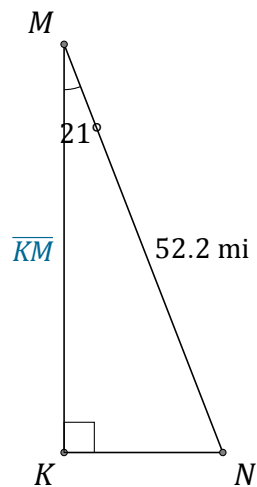
$\overline{ST} =$  \_\_\_\_\_



$\overline{XZ} =$  \_\_\_\_\_



$\overline{GJ} =$  \_\_\_\_\_



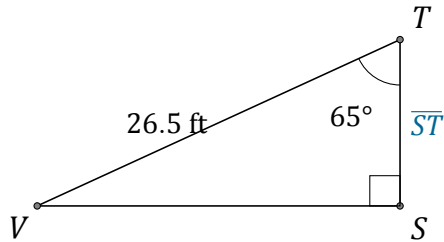
$\overline{KM} =$  \_\_\_\_\_

# Función Coseno (B) Respuestas

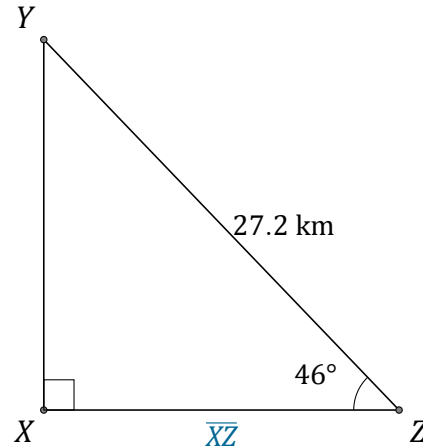
Nombre: \_\_\_\_\_

Fecha: \_\_\_\_\_

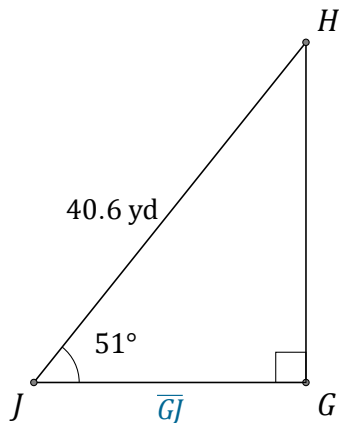
Calcule los valores de los lados usando la función coseno:  $\cos(\alpha) = \frac{C.A.}{H}$



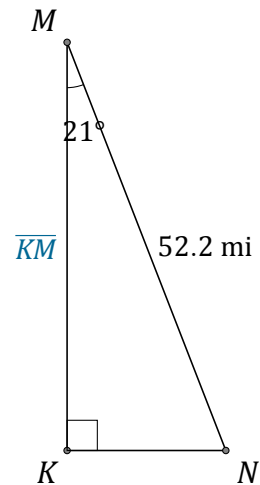
$$\overline{ST} = \underline{11.2 \text{ ft}}$$



$$\overline{XZ} = \underline{18.9 \text{ km}}$$



$$\overline{GJ} = \underline{25.6 \text{ yd}}$$



$$\overline{KM} = \underline{48.7 \text{ mi}}$$