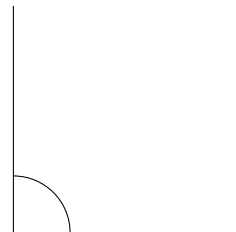
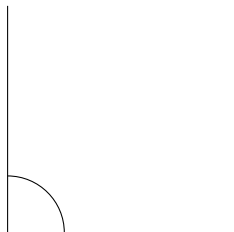
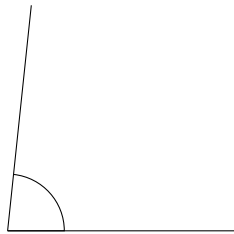
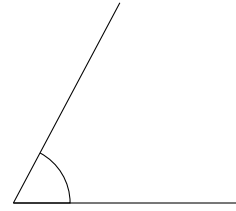
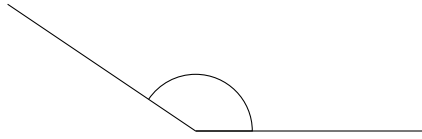


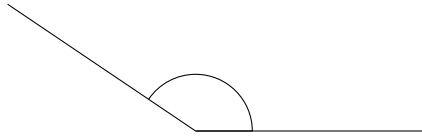
Clasificar Ángulos (D)

Clasifique cada ángulo como agudo, recto, u obtuso.

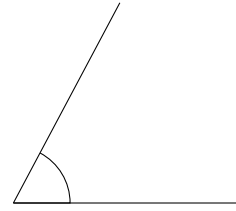


Clasificar Ángulos (D) Respuestas

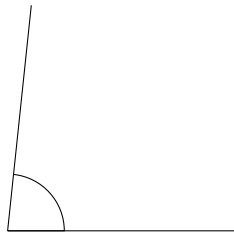
Clasifique cada ángulo como agudo, recto, u obtuso.



obtuso



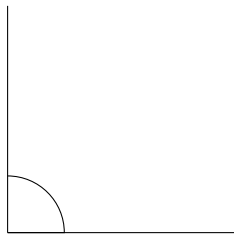
agudo



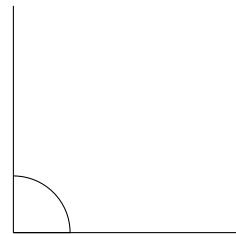
agudo



obtuso



recto



recto